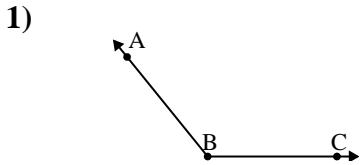




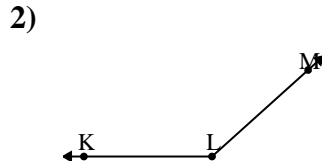
Solve each problem.

Answers



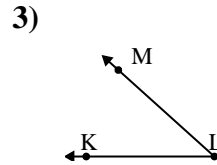
Which choice best represents  $\angle ABC$ ?

- A.  $129^\circ$
- B.  $48^\circ$
- C.  $153^\circ$
- D.  $175^\circ$



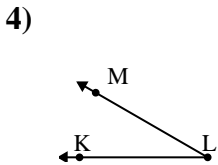
Which choice best represents  $\angle KLM$ ?

- A.  $176^\circ$
- B.  $66^\circ$
- C.  $40^\circ$
- D.  $138^\circ$



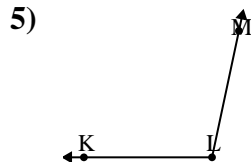
Which choice best represents  $\angle KLM$ ?

- A.  $148^\circ$
- B.  $126^\circ$
- C.  $42^\circ$
- D.  $94^\circ$



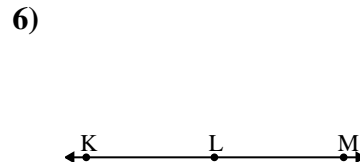
Which choice best represents  $\angle KLM$ ?

- A.  $30^\circ$
- B.  $7^\circ$
- C.  $156^\circ$
- D.  $66^\circ$



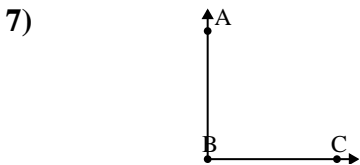
Which choice best represents  $\angle KLM$ ?

- A.  $129^\circ$
- B.  $102^\circ$
- C.  $13^\circ$
- D.  $56^\circ$



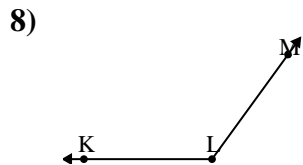
Which choice best represents  $\angle KLM$ ?

- A.  $28^\circ$
- B.  $146^\circ$
- C.  $2^\circ$
- D.  $180^\circ$



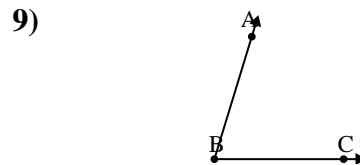
Which choice best represents  $\angle ABC$ ?

- A.  $35^\circ$
- B.  $90^\circ$
- C.  $172^\circ$
- D.  $62^\circ$



Which choice best represents  $\angle KLM$ ?

- A.  $67^\circ$
- B.  $153^\circ$
- C.  $18^\circ$
- D.  $126^\circ$



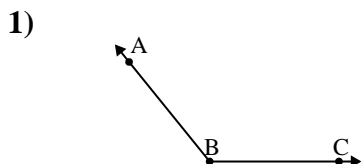
Which choice best represents  $\angle ABC$ ?

- A.  $123^\circ$
- B.  $42^\circ$
- C.  $157^\circ$
- D.  $73^\circ$

- 1. \_\_\_\_\_
- 2. \_\_\_\_\_
- 3. \_\_\_\_\_
- 4. \_\_\_\_\_
- 5. \_\_\_\_\_
- 6. \_\_\_\_\_
- 7. \_\_\_\_\_
- 8. \_\_\_\_\_
- 9. \_\_\_\_\_

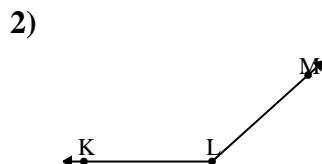


Solve each problem.



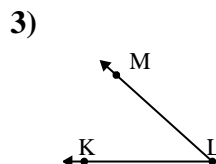
Which choice best represents  $\angle ABC$ ?

- A.  $129^\circ$
- B.  $48^\circ$
- C.  $153^\circ$
- D.  $175^\circ$



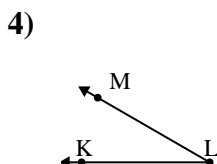
Which choice best represents  $\angle KLM$ ?

- A.  $176^\circ$
- B.  $66^\circ$
- C.  $40^\circ$
- D.  $138^\circ$



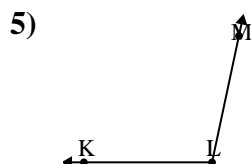
Which choice best represents  $\angle KLM$ ?

- A.  $148^\circ$
- B.  $126^\circ$
- C.  $42^\circ$
- D.  $94^\circ$



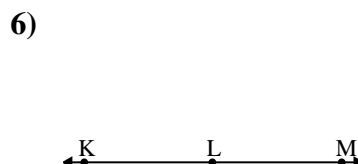
Which choice best represents  $\angle KLM$ ?

- A.  $30^\circ$
- B.  $7^\circ$
- C.  $156^\circ$
- D.  $66^\circ$



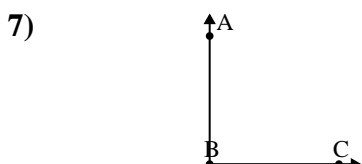
Which choice best represents  $\angle KLM$ ?

- A.  $129^\circ$
- B.  $102^\circ$
- C.  $13^\circ$
- D.  $56^\circ$



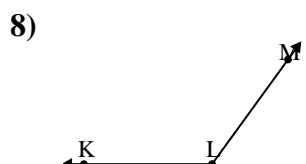
Which choice best represents  $\angle KLM$ ?

- A.  $28^\circ$
- B.  $146^\circ$
- C.  $2^\circ$
- D.  $180^\circ$



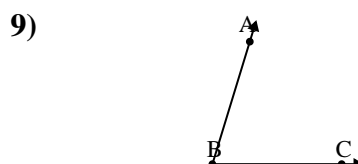
Which choice best represents  $\angle ABC$ ?

- A.  $35^\circ$
- B.  $90^\circ$
- C.  $172^\circ$
- D.  $62^\circ$



Which choice best represents  $\angle KLM$ ?

- A.  $67^\circ$
- B.  $153^\circ$
- C.  $18^\circ$
- D.  $126^\circ$



Which choice best represents  $\angle ABC$ ?

- A.  $123^\circ$
- B.  $42^\circ$
- C.  $157^\circ$
- D.  $73^\circ$

Answers

- 1.     **A**
- 2.     **D**
- 3.     **C**
- 4.     **A**
- 5.     **B**
- 6.     **D**
- 7.     **B**
- 8.     **D**
- 9.     **D**