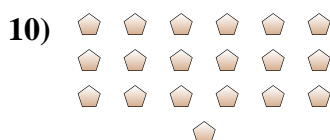
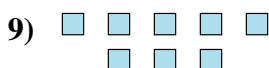
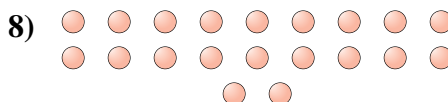
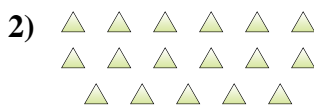
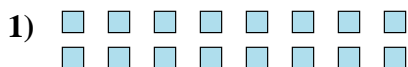




Determine if the number of shapes is even or odd.

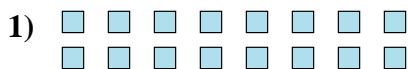


Answers

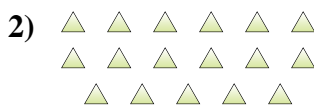
- 1. _____
- 2. _____
- 3. _____
- 4. _____
- 5. _____
- 6. _____
- 7. _____
- 8. _____
- 9. _____
- 10. _____



Determine if the number of shapes is even or odd.



16



17



5



6



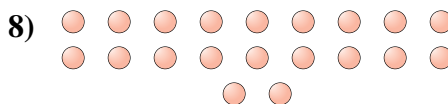
13



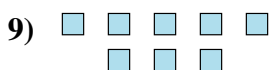
15



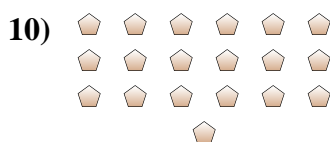
8



20



8



19

Answers

1. even

2. odd

3. odd

4. even

5. odd

6. odd

7. even

8. even

9. even

10. odd