



Determine how many groups of 100 can be created from the blocks shown.

Answers

Ex)

Ex. 2

1)

1. _____

2)

2. _____

3)

3. _____

4)

4. _____

5)

5. _____

6)

6. _____

7)

7. _____

8)

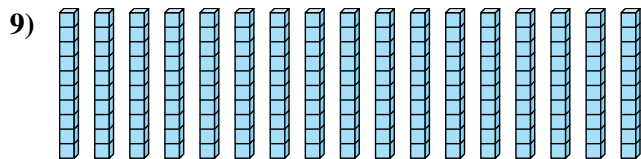
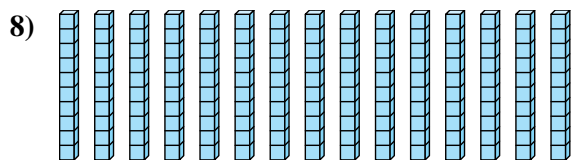
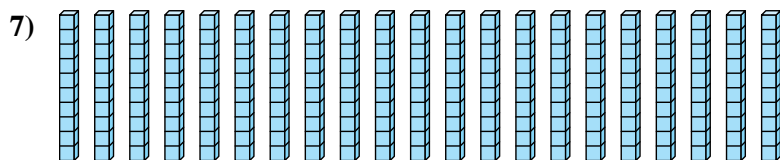
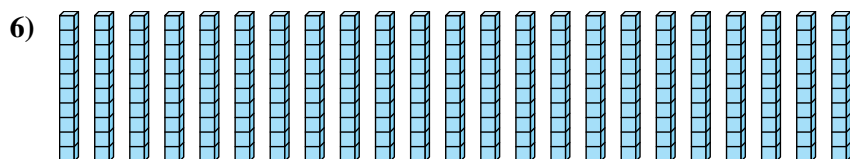


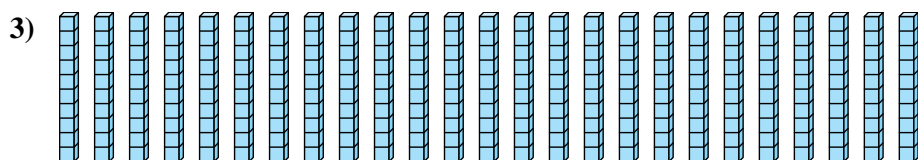
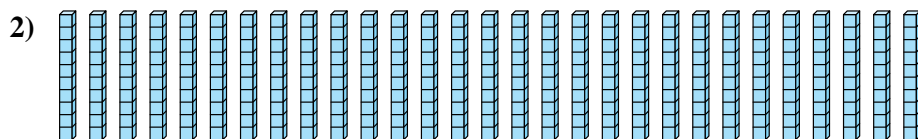
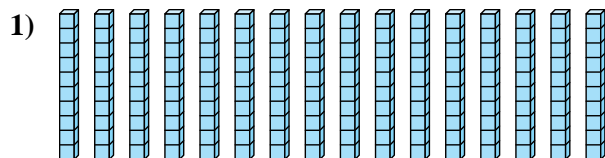
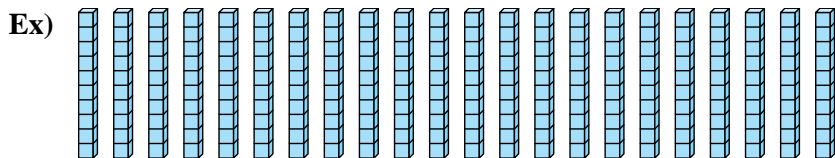
8. _____

9)

9. _____



Determine how many groups of 100 can be created from the blocks shown.



Answers

Ex. 2

1. 1

2. 2

3. 2

4. 1

5. 1

6. 2

7. 2

8. 1

9. 1