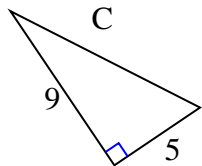




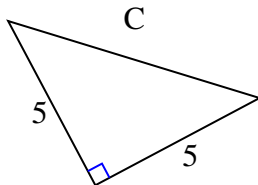
Find the value of 'C' round your answer to the nearest hundredth.

Answers

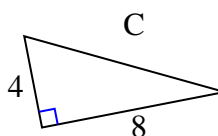
1)



2)



3)



1. _____

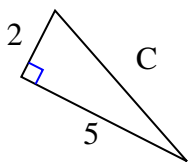
2. _____

3. _____

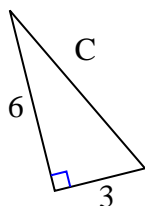
4. _____

5. _____

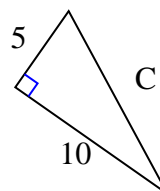
4)



5)



6)



6. _____

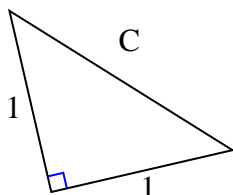
7. _____

8. _____

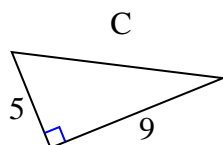
9. _____

10. _____

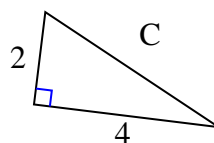
7)



8)



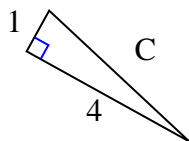
9)



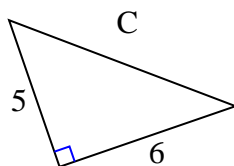
11. _____

12. _____

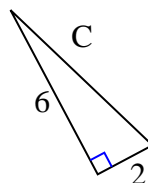
10)



11)



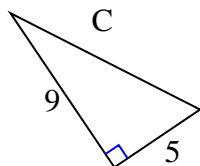
12)





Find the value of 'C' round your answer to the nearest hundredth.

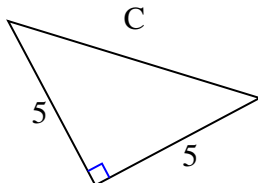
1)



$$81 + 25 = 106$$

$$\sqrt{106} = 10.3$$

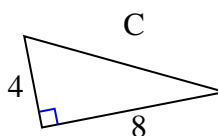
2)



$$25 + 25 = 50$$

$$\sqrt{50} = 7.07$$

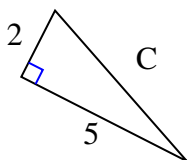
3)



$$16 + 64 = 80$$

$$\sqrt{80} = 8.94$$

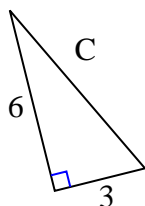
4)



$$4 + 25 = 29$$

$$\sqrt{29} = 5.39$$

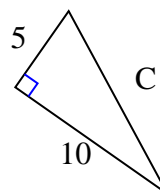
5)



$$36 + 9 = 45$$

$$\sqrt{45} = 6.71$$

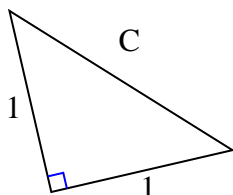
6)



$$25 + 100 = 125$$

$$\sqrt{125} = 11.18$$

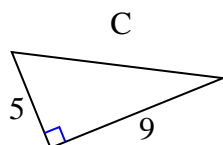
7)



$$1 + 1 = 2$$

$$\sqrt{2} = 1.41$$

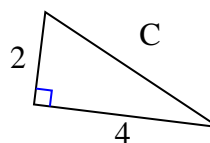
8)



$$25 + 81 = 106$$

$$\sqrt{106} = 10.3$$

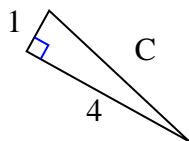
9)



$$4 + 16 = 20$$

$$\sqrt{20} = 4.47$$

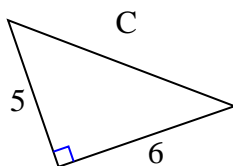
10)



$$1 + 16 = 17$$

$$\sqrt{17} = 4.12$$

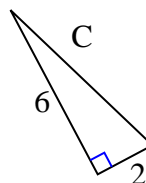
11)



$$25 + 36 = 61$$

$$\sqrt{61} = 7.81$$

12)



$$36 + 4 = 40$$

$$\sqrt{40} = 6.32$$

Answers1. 10.32. 7.073. 8.944. 5.395. 6.716. 11.187. 1.418. 10.39. 4.4710. 4.1211. 7.8112. 6.32