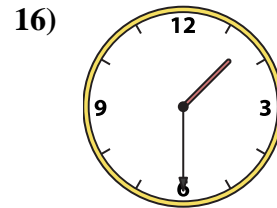
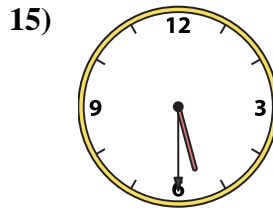
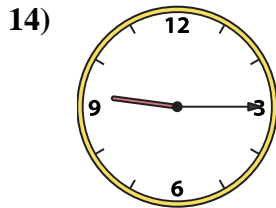
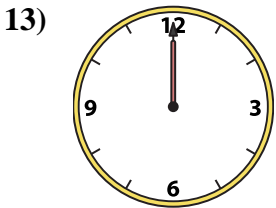
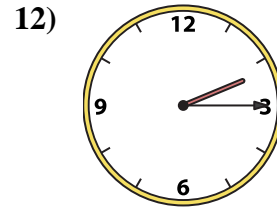
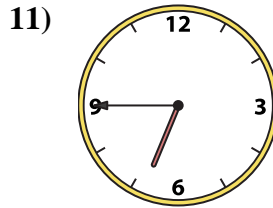
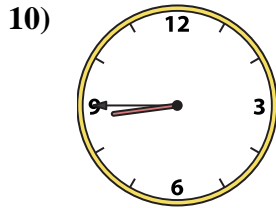
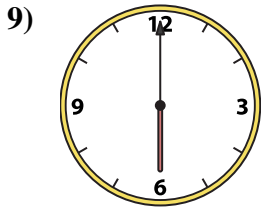
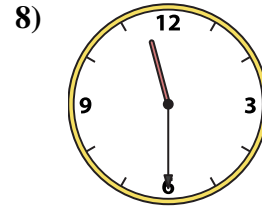
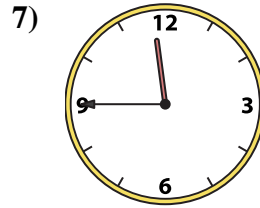
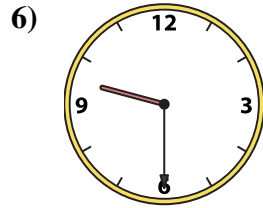
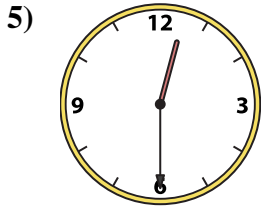
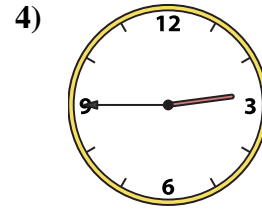
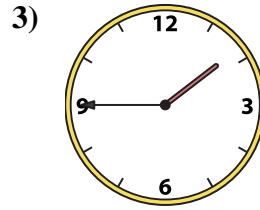
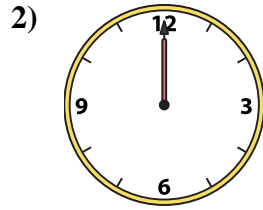
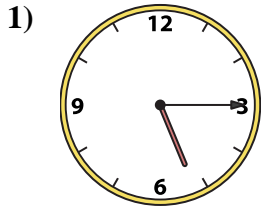




Match the analog clock to the digital clock.



A. 9:30

B. 12:30

C. 6:45

D. 11:45

E. 1:45

F. 9:15

G. 1:30

H. 2:15

I. 5:15

J. 6:00

K. 5:30

L. 12:00

M. 11:30

N. 2:45

O. 8:45

P. 12:00

Answers

1. \_\_\_\_\_

2. \_\_\_\_\_

3. \_\_\_\_\_

4. \_\_\_\_\_

5. \_\_\_\_\_

6. \_\_\_\_\_

7. \_\_\_\_\_

8. \_\_\_\_\_

9. \_\_\_\_\_

10. \_\_\_\_\_

11. \_\_\_\_\_

12. \_\_\_\_\_

13. \_\_\_\_\_

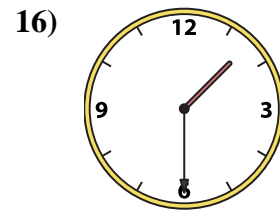
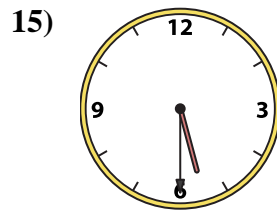
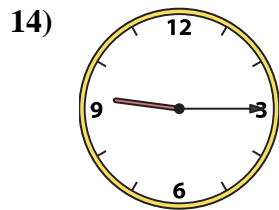
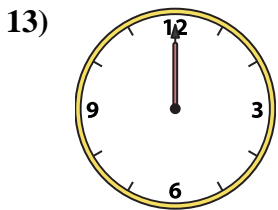
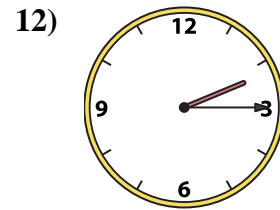
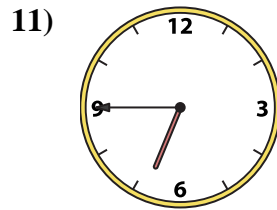
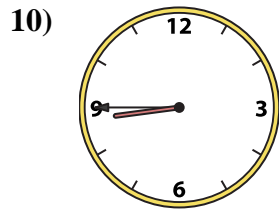
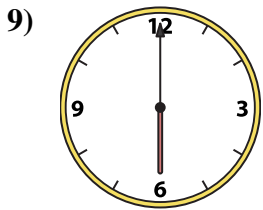
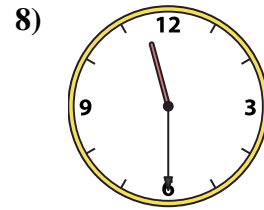
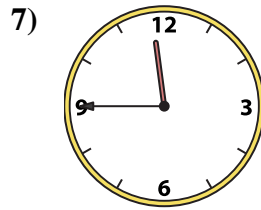
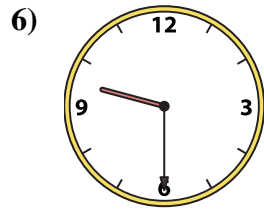
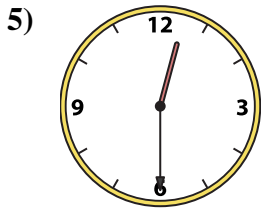
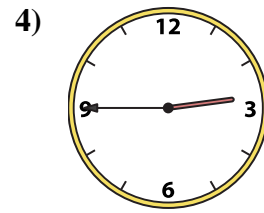
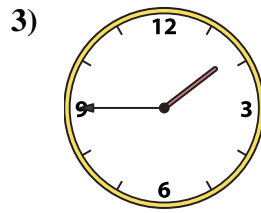
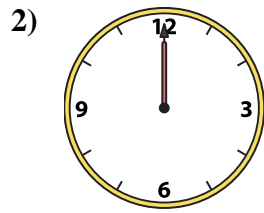
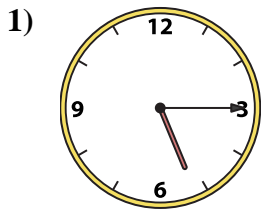
14. \_\_\_\_\_

15. \_\_\_\_\_

16. \_\_\_\_\_



Match the analog clock to the digital clock.



A. **9:30**

B. **12:30**

C. **6:45**

D. **11:45**

E. **1:45**

F. **9:15**

G. **1:30**

H. **2:15**

I. **5:15**

J. **6:00**

K. **5:30**

L. **12:00**

M. **11:30**

N. **2:45**

O. **8:45**

P. **12:00**

**Answers**

1. **I**

2. **L**

3. **E**

4. **N**

5. **B**

6. **A**

7. **D**

8. **M**

9. **J**

10. **O**

11. **C**

12. **H**

13. **P**

14. **F**

15. **K**

16. **G**