



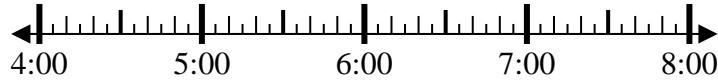
Solve each problem.

Answers

1) Start: 4:40

Elapsed: 1 hr & 15 mins

End: _____



1. _____

2) Start: 7:25

Elapsed: 1 hr & 50 mins

End: _____



2. _____

3) Start: 7:00

Elapsed: 2 hrs & 10 mins

End: _____



3. _____

4) Start: 8:10

Elapsed: 1 hr & 45 mins

End: _____



4. _____

5) Start: 11:45

Elapsed: 2 hrs & 40 mins

End: _____

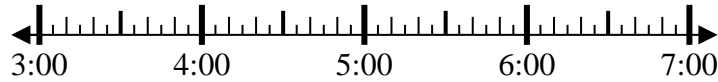


5. _____

6) Start: 3:10

Elapsed: 1 hr & 25 mins

End: _____

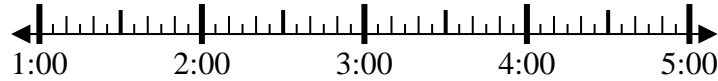


6. _____

7) Start: 1:15

Elapsed: 2 hrs & 35 mins

End: _____

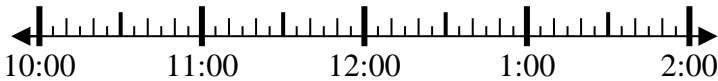


7. _____

8) Start: 10:20

Elapsed: 2 hrs & 35 mins

End: _____



8. _____



Solve each problem.

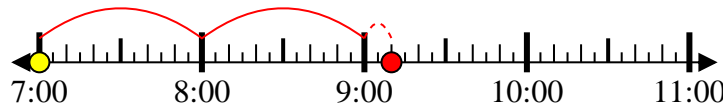
1) Start: 4:40
Elapsed: 1 hr & 15 mins
End: 5:55



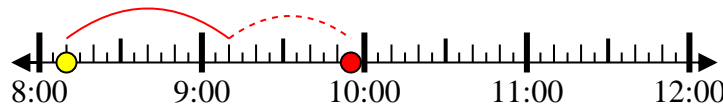
2) Start: 7:25
Elapsed: 1 hr & 50 mins
End: 9:15



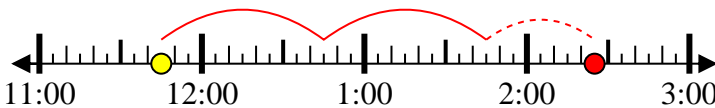
3) Start: 7:00
Elapsed: 2 hrs & 10 mins
End: 9:10



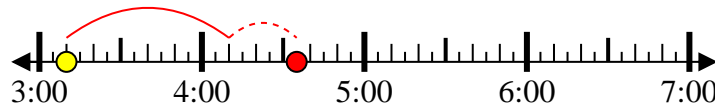
4) Start: 8:10
Elapsed: 1 hr & 45 mins
End: 9:55



5) Start: 11:45
Elapsed: 2 hrs & 40 mins
End: 2:25



6) Start: 3:10
Elapsed: 1 hr & 25 mins
End: 4:35



7) Start: 1:15
Elapsed: 2 hrs & 35 mins
End: 3:50



8) Start: 10:20
Elapsed: 2 hrs & 35 mins
End: 12:55



Answers

1. 5:55

2. 9:15

3. 9:10

4. 9:55

5. 2:25

6. 4:35

7. 3:50

8. 12:55