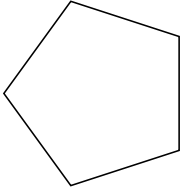


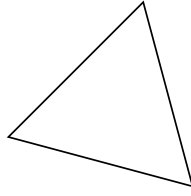


Identifying the type of shape shown.

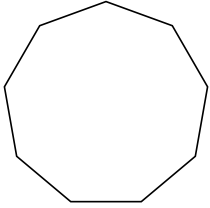
1)



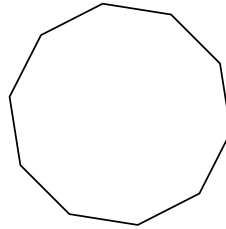
2)



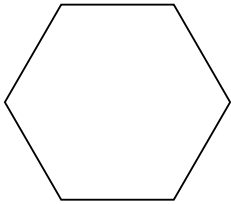
3)



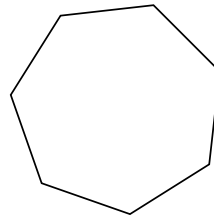
4)




5)



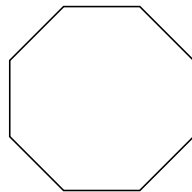
6)



7)



8)



Answers

1. _____

2. _____

3. _____

4. _____

5. _____

6. _____

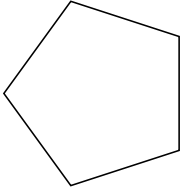
7. _____

8. _____

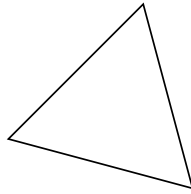


Identifying the type of shape shown.

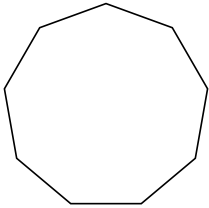
1)



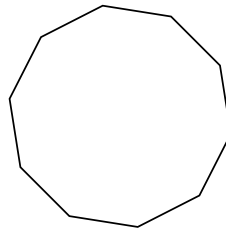
2)



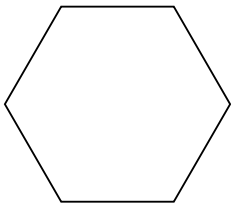
3)



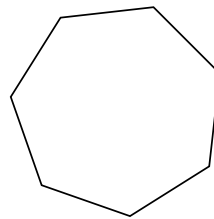
4)




5)



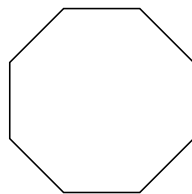
6)



7)



8)



Answers

1. pentagon

2. triangle

3. nonagon

4. decagon

5. hexagon

6. heptagon

7. quadrilateral

8. octagon