



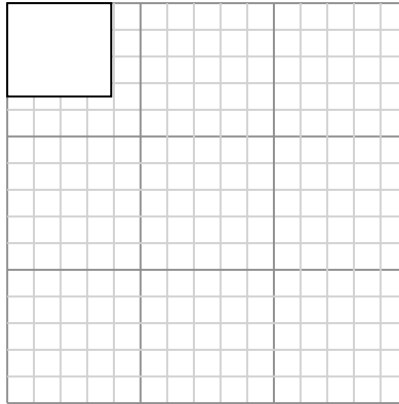
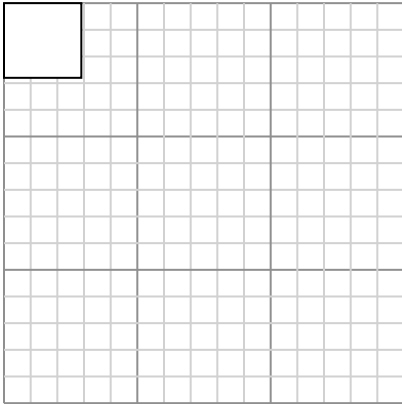
Draw each rectangle to the scale shown and determine the new dimensions.

Answers

- 1) The rectangle below has the dimensions:
 2.9×2.8

- 2) The rectangle below has the dimensions:
 3.9×3.5

1. _____



2. _____

3. _____

4. _____

5. _____

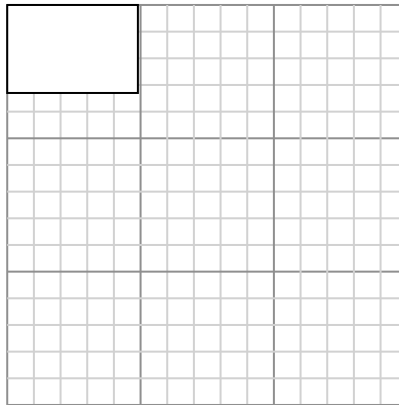
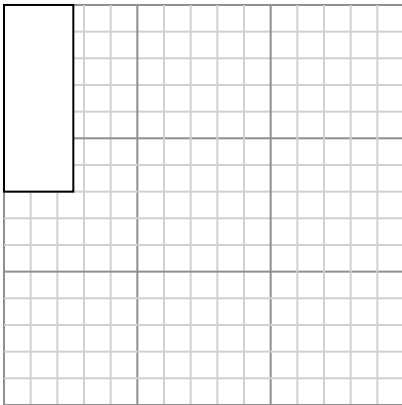
6. _____

Create another rectangle that is scaled to 16 times the size of the current rectangle.

Create another rectangle that is scaled to 9 times the size of the current rectangle.

- 3) The rectangle below has the dimensions:
 2.6×7

- 4) The rectangle below has the dimensions:
 4.9×3.3

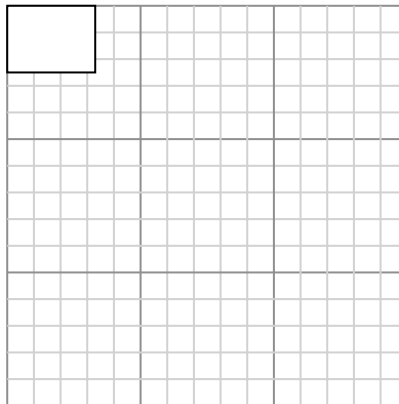
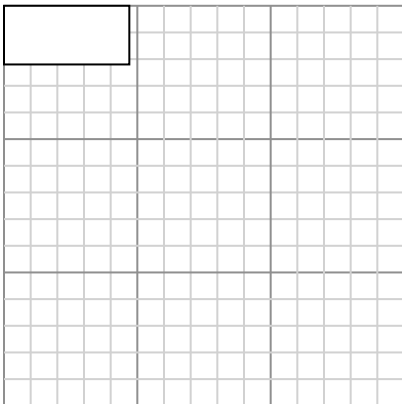


Create another rectangle that is scaled to 4 times the size of the current rectangle.

Create another rectangle that is scaled to 4 times the size of the current rectangle.

- 5) The rectangle below has the dimensions:
 4.7×2.2

- 6) The rectangle below has the dimensions:
 3.3×2.5



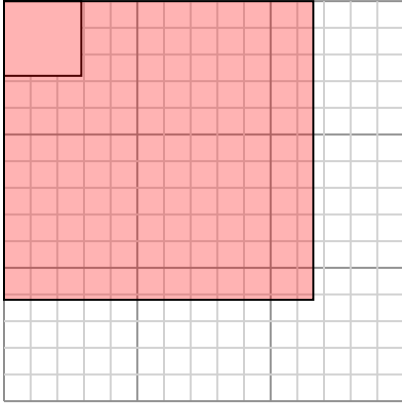
Create another rectangle that is scaled to 9 times the size of the current rectangle.

Create another rectangle that is scaled to 9 times the size of the current rectangle.



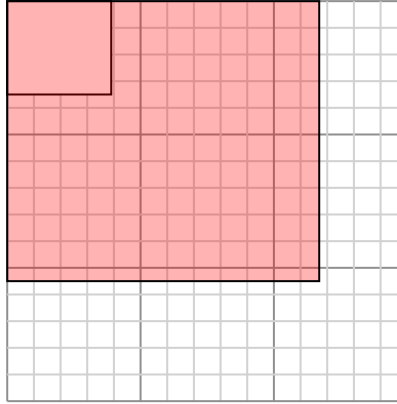
Draw each rectangle to the scale shown and determine the new dimensions.

- 1) The rectangle below has the dimensions:
 2.9×2.8



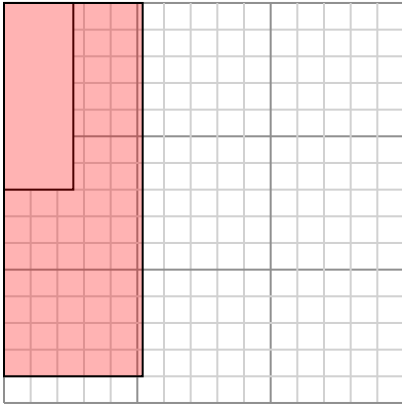
Create another rectangle that is scaled to 16 times the size of the current rectangle.

- 2) The rectangle below has the dimensions:
 3.9×3.5



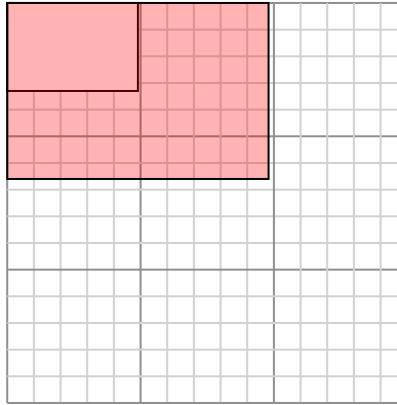
Create another rectangle that is scaled to 9 times the size of the current rectangle.

- 3) The rectangle below has the dimensions:
 2.6×7



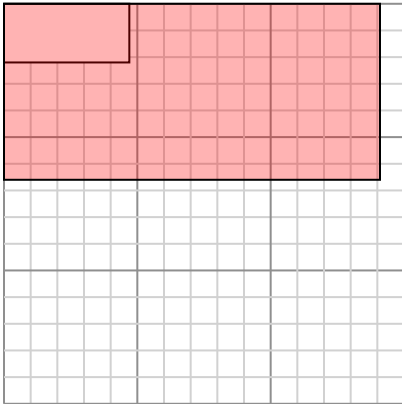
Create another rectangle that is scaled to 4 times the size of the current rectangle.

- 4) The rectangle below has the dimensions:
 4.9×3.3



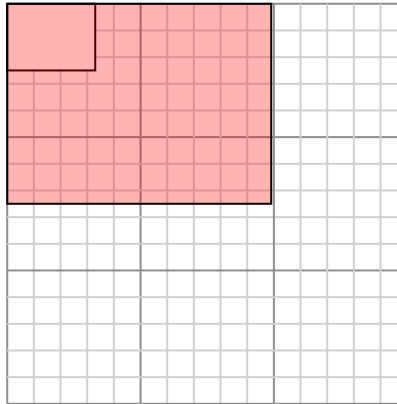
Create another rectangle that is scaled to 4 times the size of the current rectangle.

- 5) The rectangle below has the dimensions:
 4.7×2.2



Create another rectangle that is scaled to 9 times the size of the current rectangle.

- 6) The rectangle below has the dimensions:
 3.3×2.5



Create another rectangle that is scaled to 9 times the size of the current rectangle.

Answers

1. 11.6×11.2

2. 11.7×10.5

3. 5.2×14

4. 9.8×6.6

5. 14.1×6.6

6. 9.9×7.5