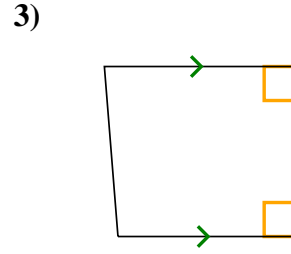
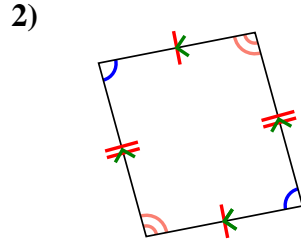
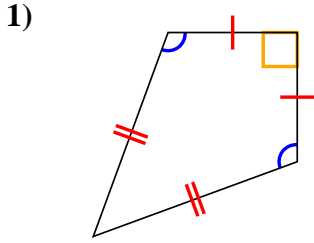




Determine if the shape shown is a Quadrilateral, Kite, Trapezoid, Parallelogram, Rhombus, Rectangle or Square (can be more than one).

Answers



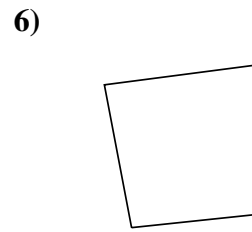
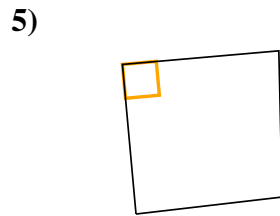
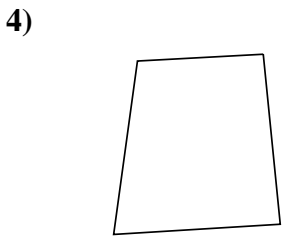
1. _____

2. _____

3. _____

4. _____

5. _____

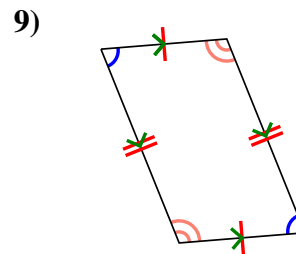
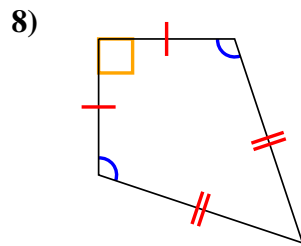
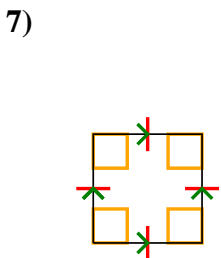


6. _____

7. _____

8. _____

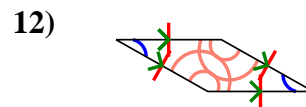
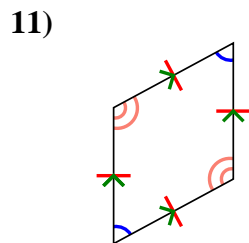
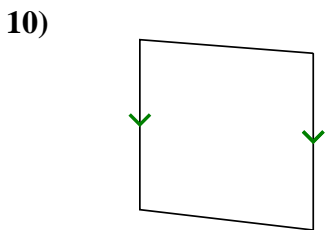
9. _____



10. _____

11. _____

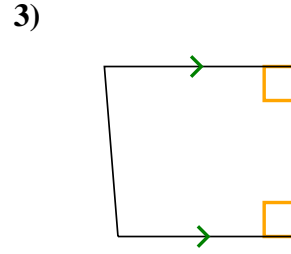
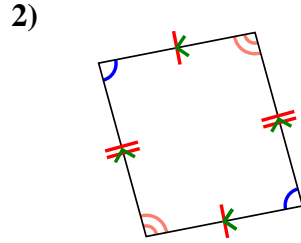
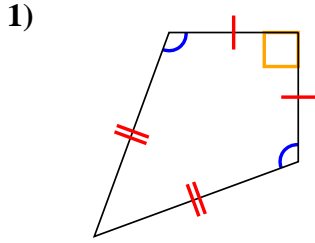
12. _____



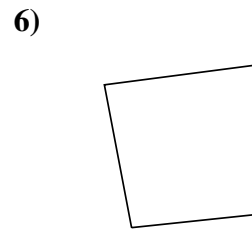
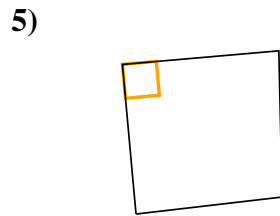
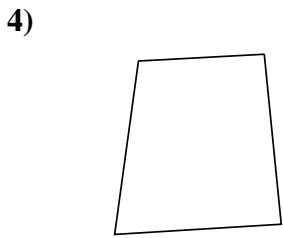


Determine if the shape shown is a Quadrilateral, Kite, Trapezoid, Parallelogram, Rhombus, Rectangle or Square (can be more than one).

Answers



1. Q,K



2. Q,P

3. Q,T

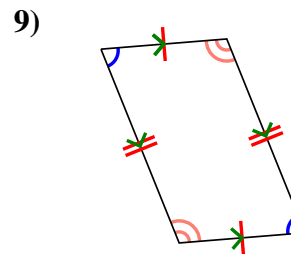
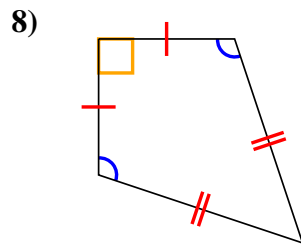
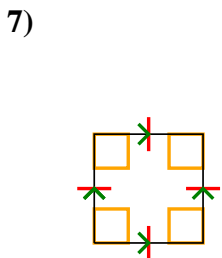
4. Q

5. Q

6. Q

7. Q,P,H,R,S

8. Q,K



9. Q,P

10. Q,T

11. Q,P,H

12. Q,P,H

