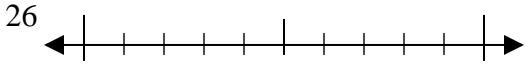




Use the numberlines to round each number to the nearest 10.

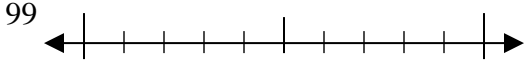
Answers

Ex)



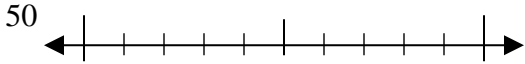
Ex. 30

1)



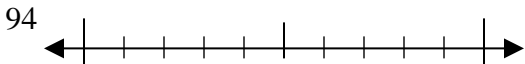
1. \_\_\_\_\_

2)



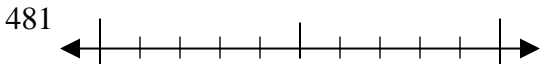
2. \_\_\_\_\_

3)



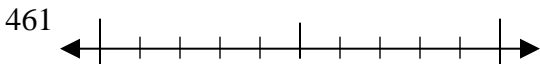
3. \_\_\_\_\_

4)



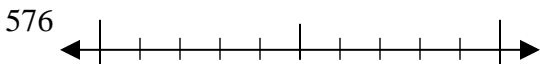
4. \_\_\_\_\_

5)



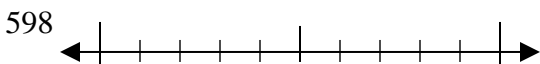
5. \_\_\_\_\_

6)



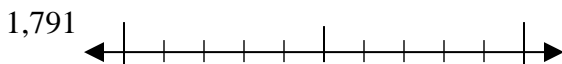
6. \_\_\_\_\_

7)



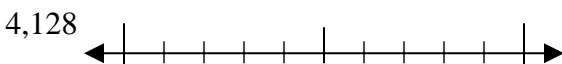
7. \_\_\_\_\_

8)



8. \_\_\_\_\_

9)

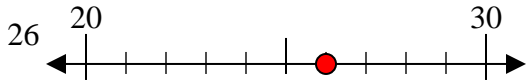


9. \_\_\_\_\_



Use the numberlines to round each number to the nearest 10.

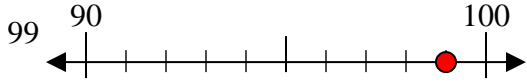
Ex)



Answers

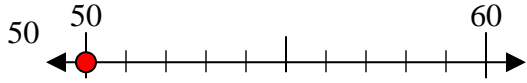
Ex. 30

1)



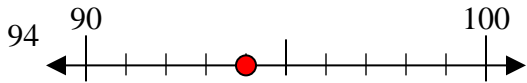
1. 100

2)



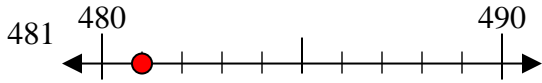
2. 50

3)



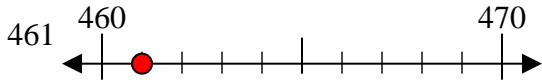
3. 90

4)



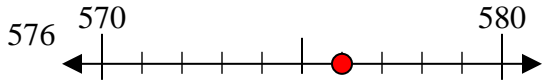
4. 480

5)



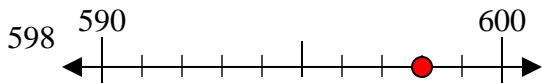
5. 460

6)



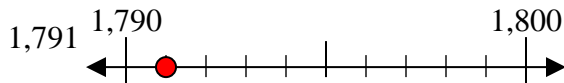
6. 580

7)



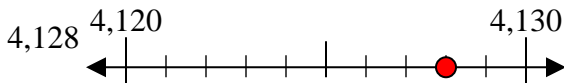
7. 600

8)



8. 1790

9)



9. 4130