



Use the numberlines to round each number to the nearest 100.

Ex)

22,128



Answers

Ex. 22,100

1)

7,798



1. _____

2)

73,791



2. _____

3)

48,807



3. _____

4)

1,381



4. _____

5)

746



5. _____

6)

140



6. _____

7)

904



7. _____

8)

93,445



8. _____

9)

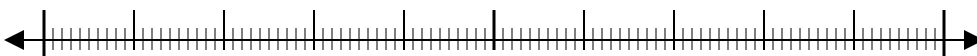
4,176



9. _____

10)

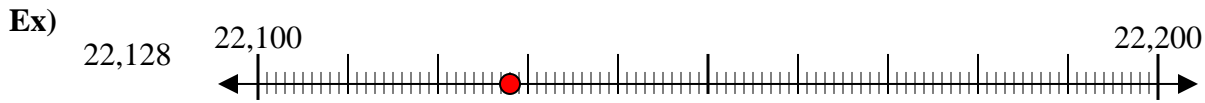
369



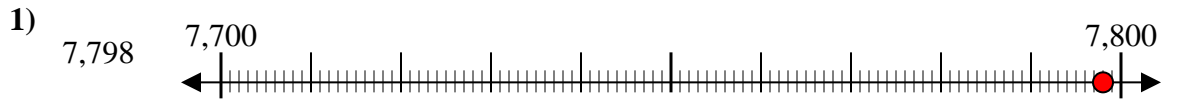
10. _____



Use the numberlines to round each number to the nearest 100.



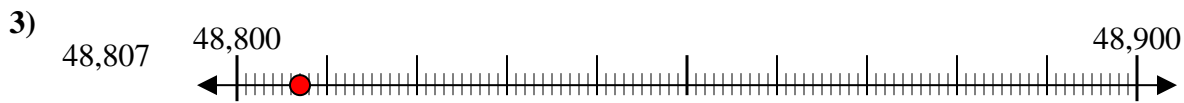
Answers
Ex. **22,100**



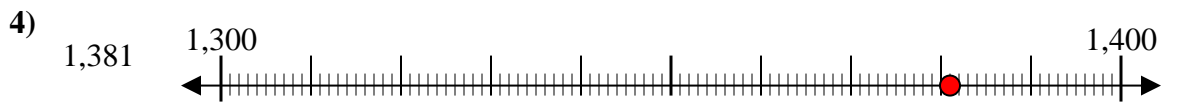
1. **7,800**



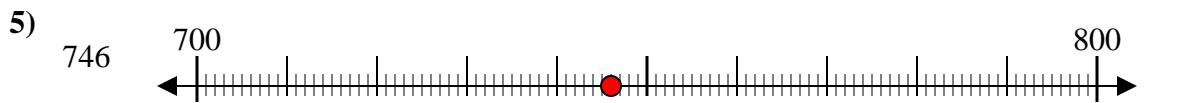
2. **73,800**



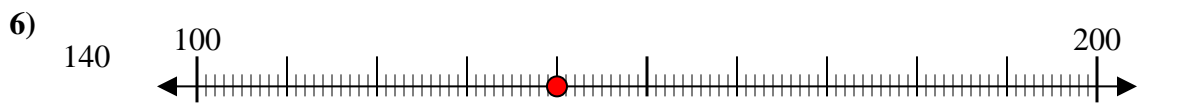
3. **48,800**



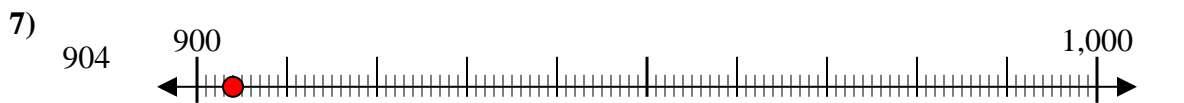
4. **1,400**



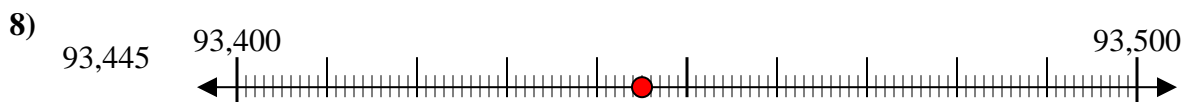
5. **700**



6. **100**



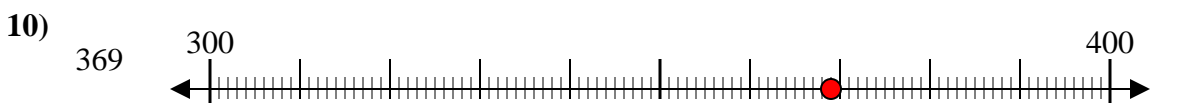
7. **900**



8. **93,400**



9. **4,200**



10. **400**