



Solve each problem using the distributive property of division.

1) $160 \div 4 =$

2) $190 \div 5 =$

3) $592 \div 8 =$

4) $511 \div 7 =$

5) $420 \div 5 =$

6) $360 \div 8 =$

7) $765 \div 9 =$

8) $675 \div 9 =$

9) $224 \div 4 =$

10) $230 \div 5 =$

Answers

1. _____

2. _____

3. _____

4. _____

5. _____

6. _____

7. _____

8. _____

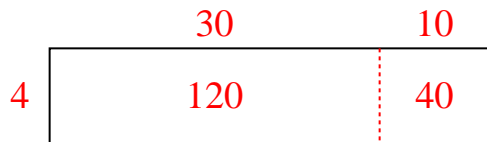
9. _____

10. _____

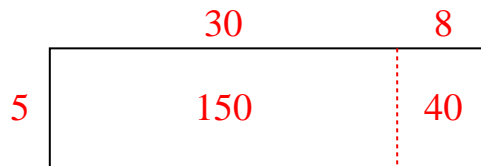


Solve each problem using the distributive property of division.

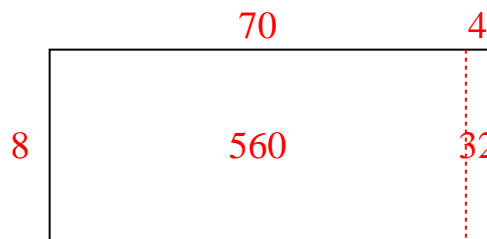
1) $160 \div 4 =$



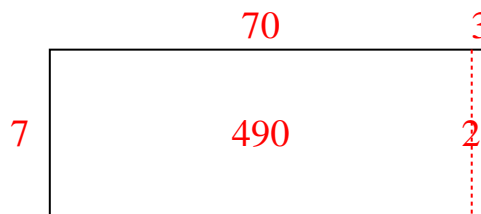
2) $190 \div 5 =$




3) $592 \div 8 =$



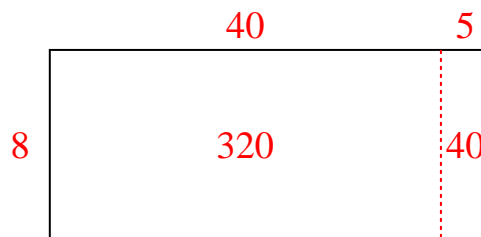
4) $511 \div 7 =$



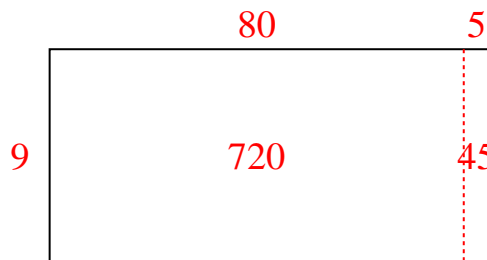
5) $420 \div 5 =$



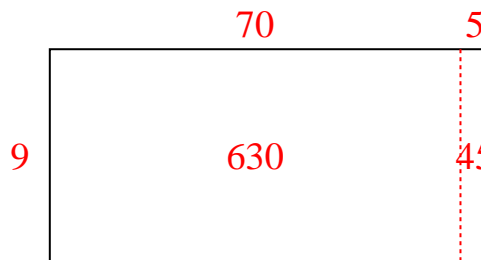
6) $360 \div 8 =$



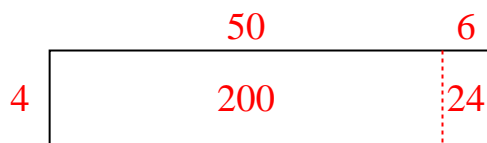
7) $765 \div 9 =$



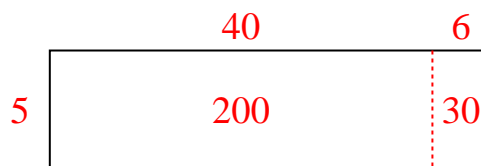
8) $675 \div 9 =$



9) $224 \div 4 =$



10) $230 \div 5 =$

Answers1. **40**2. **38**3. **74**4. **73**5. **84**6. **45**7. **85**8. **75**9. **56**10. **46**