

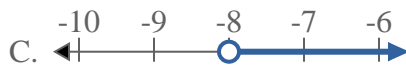


Solve each problem.

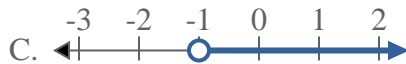
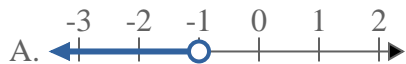
1) Which option best shows  $X < 20$



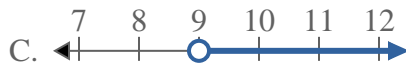
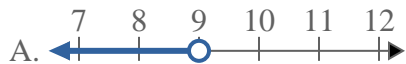
3) Which option best shows  $X \leq -8$



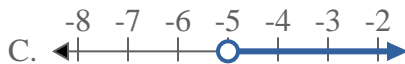
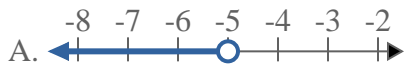
5) Which option best shows  $X > -1$



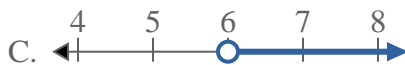
7) Which option best shows  $X < 9$



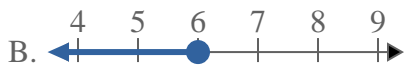
2) Which option best shows  $X \geq -5$



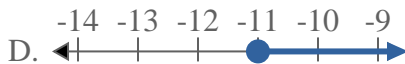
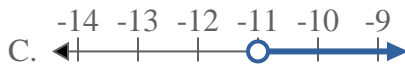
4) Which option best shows  $X \geq 6$



6) Which option best shows  $X \leq 6$



8) Which option best shows  $X \leq -11$



**Answers**

1. \_\_\_\_\_

2. \_\_\_\_\_

3. \_\_\_\_\_

4. \_\_\_\_\_

5. \_\_\_\_\_

6. \_\_\_\_\_

7. \_\_\_\_\_

8. \_\_\_\_\_

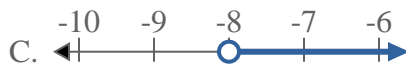


Solve each problem.

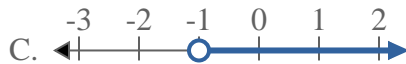
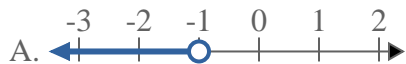
1) Which option best shows  $X < 20$



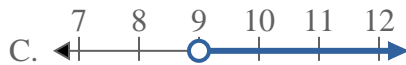
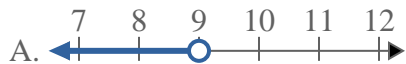
3) Which option best shows  $X \leq -8$



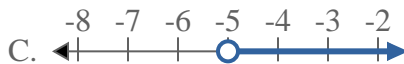
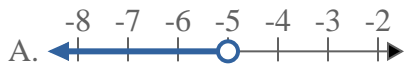
5) Which option best shows  $X > -1$



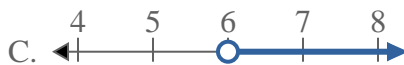
7) Which option best shows  $X < 9$



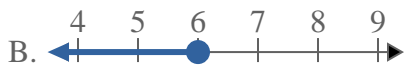
2) Which option best shows  $X \geq -5$



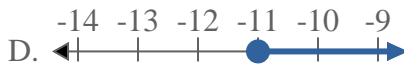
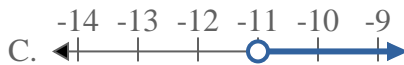
4) Which option best shows  $X \geq 6$



6) Which option best shows  $X \leq 6$



8) Which option best shows  $X \leq -11$



**Answers**

1.   **A**  

2.   **D**  

3.   **B**  

4.   **D**  

5.   **C**  

6.   **B**  

7.   **A**  

8.   **B**