



Use lattice multiplication to solve each problem.

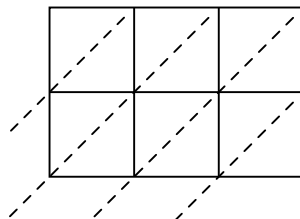
1) $591 \times 54 =$



2) $722 \times 75 =$



3) $524 \times 33 =$



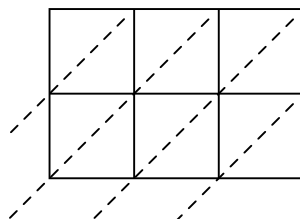
4) $698 \times 33 =$



5) $447 \times 39 =$



6) $111 \times 53 =$



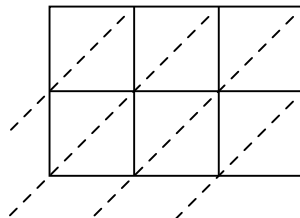
7) $696 \times 63 =$



8) $568 \times 79 =$



9) $907 \times 26 =$



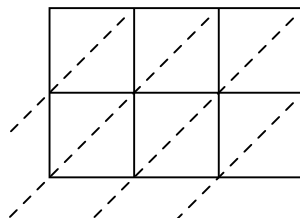
10) $399 \times 30 =$



11) $798 \times 26 =$



12) $712 \times 46 =$



Answers

1. _____

2. _____

3. _____

4. _____

5. _____

6. _____

7. _____

8. _____

9. _____

10. _____

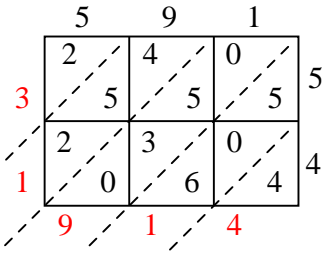
11. _____

12. _____

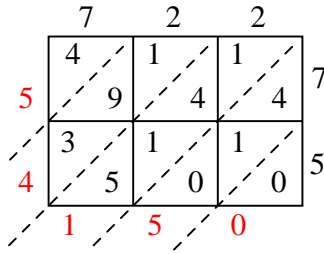


Use lattice multiplication to solve each problem.

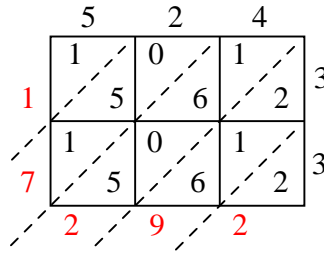
1) $591 \times 54 =$



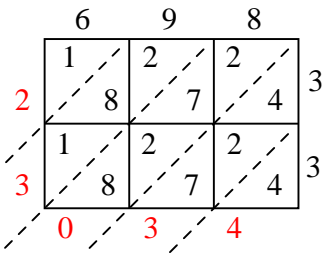
2) $722 \times 75 =$



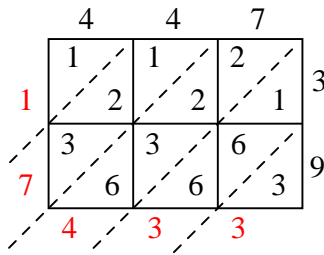
3) $524 \times 33 =$



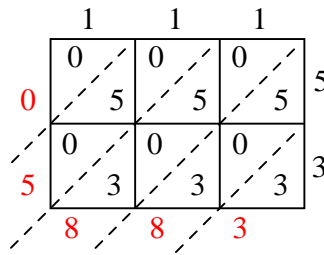
4) $698 \times 33 =$



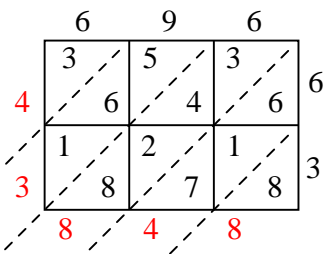
5) $447 \times 39 =$



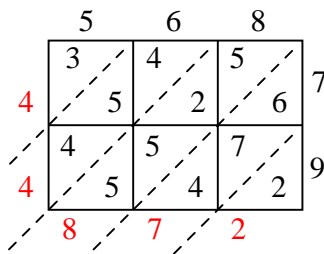
6) $111 \times 53 =$



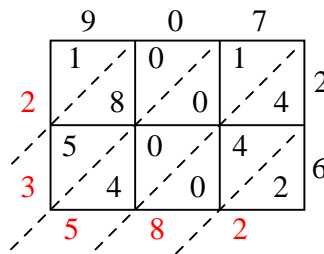
7) $696 \times 63 =$



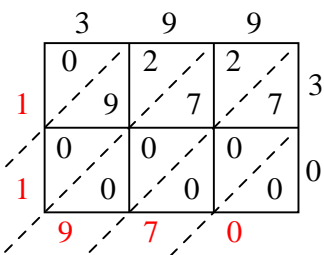
8) $568 \times 79 =$



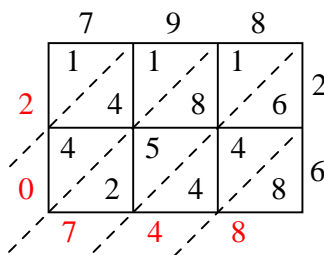
9) $907 \times 26 =$



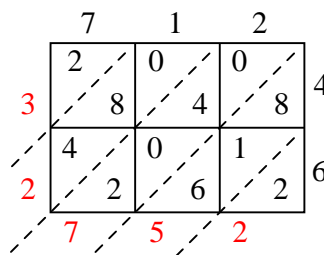
10) $399 \times 30 =$



11) $798 \times 26 =$



12) $712 \times 46 =$



Answers

1. **31,914**

2. **54,150**

3. **17,292**

4. **23,034**

5. **17,433**

6. **5,883**

7. **43,848**

8. **44,872**

9. **23,582**

10. **11,970**

11. **20,748**

12. **32,752**