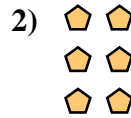






Write each array as an addition problem and solve.

Answers



Ex.  $2+2=4$



1. \_\_\_\_\_

2. \_\_\_\_\_


3. \_\_\_\_\_

4. \_\_\_\_\_

5. \_\_\_\_\_

6. \_\_\_\_\_

7. \_\_\_\_\_

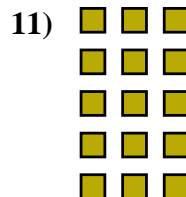



8. \_\_\_\_\_

9. \_\_\_\_\_

10. \_\_\_\_\_


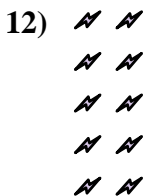
11. \_\_\_\_\_



12. \_\_\_\_\_

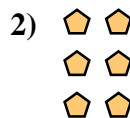
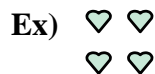
13. \_\_\_\_\_

14. \_\_\_\_\_







Write each array as an addition problem and solve.



Answers

Ex. 2+2=4



1. 3+3+3=9

2. 2+2+2=6


3. 3+3+3+3=12

4. 4+4+4=12

5. 2+2+2+2=8

6. 4+4+4+4=16

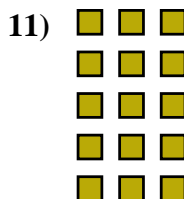
7. 5+5+5=15



8. 5+5+5+5=20

9. 4+4=8

10. 3+3=6



11. 3+3+3+3+3=15

12. 2+2+2+2+2=10

13. 5+5=10

14. 4+4+4+4+4=20

