



Measure the width and height of each block in inches and in centimeters.


Ex)



1)




2)



3)



4)



**Answers**

Ex. 3 1/2 1 8.9 2.5

1. \_\_\_\_\_

2. \_\_\_\_\_


3. \_\_\_\_\_

4. \_\_\_\_\_



Measure the width and height of each block in inches and in centimeters.

Ex)



Answers

Ex.  $3\frac{1}{2}$  1 8.9 2.5


1. 4 1 10.2 2.5

2.  $4\frac{1}{2}$  1 11.4 2.5


3.  $0\frac{1}{2}$   $0\frac{1}{2}$  1.3 1.3

4. 5 1 12.7 2.5


1)



2)



3)



4)

