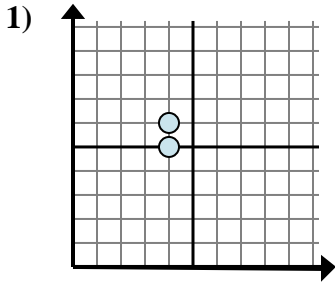


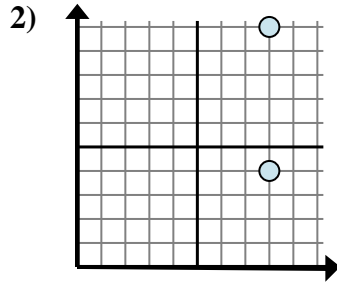


Determine which expression best shows the distance between the two points.

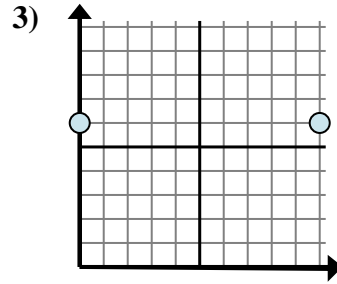
Answers



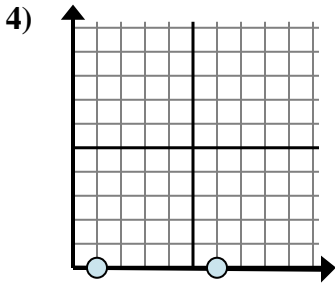
- A. $6 - 5$
- B. $4 - 4$
- C. $5 - 6$
- D. $6 - 4$



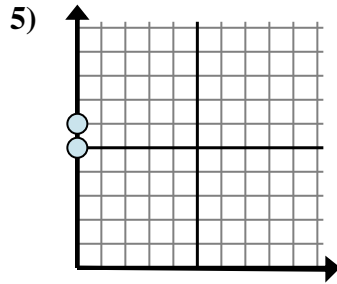
- A. $4 - 10$
- B. $8 - 8$
- C. $8 - 10$
- D. $10 - 4$



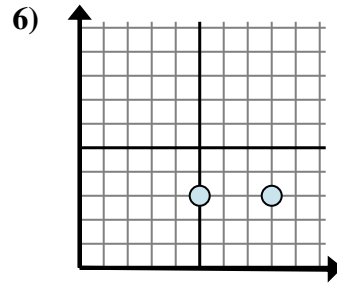
- A. $10 - 0$
- B. $0 - 10$
- C. $6 - 0$
- D. $6 - 0$



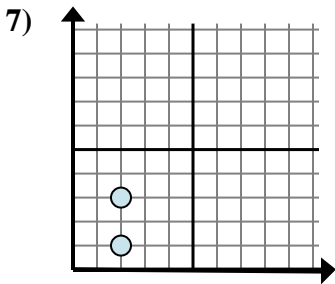
- A. $0 - 0$
- B. $0 - 0$
- C. $0 - 1$
- D. $6 - 1$



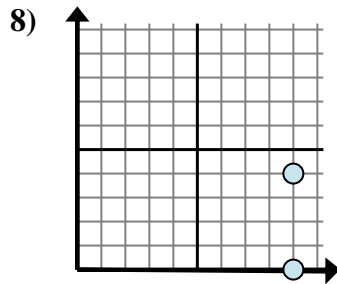
- A. $0 - 6$
- B. $0 - 0$
- C. $6 - 5$
- D. $6 - 0$



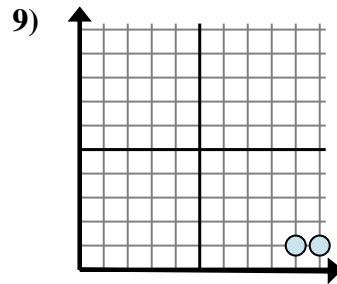
- A. $3 - 8$
- B. $8 - 3$
- C. $3 - 3$
- D. $8 - 5$



- A. $2 - 2$
- B. $3 - 2$
- C. $3 - 1$
- D. $2 - 3$



- A. $0 - 4$
- B. $9 - 4$
- C. $4 - 0$
- D. $9 - 9$



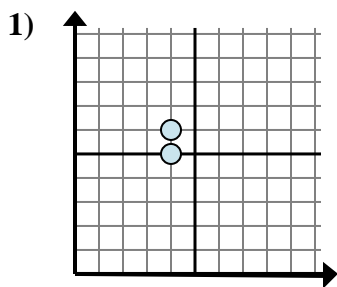
- A. $1 - 9$
- B. $10 - 9$
- C. $1 - 9$
- D. $9 - 1$

1. _____
2. _____
3. _____
4. _____
5. _____
6. _____
7. _____
8. _____
9. _____

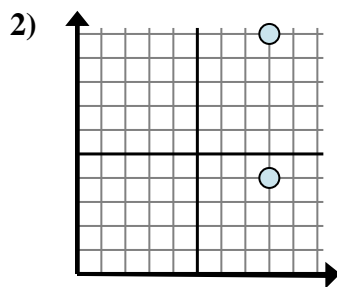


Determine which expression best shows the distance between the two points.

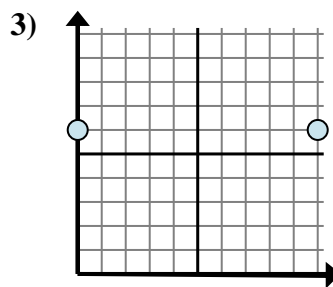
Answers



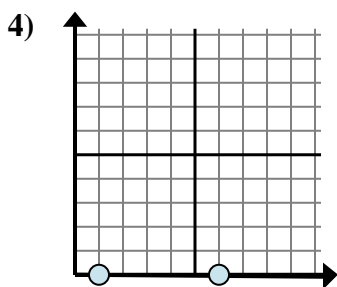
- A. $6 - 5$
- B. $4 - 4$
- C. $5 - 6$
- D. $6 - 4$



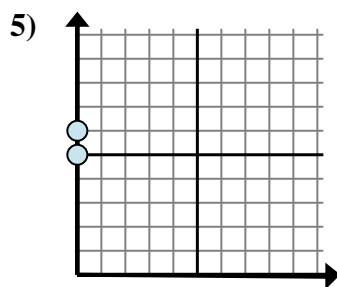
- A. $4 - 10$
- B. $8 - 8$
- C. $8 - 10$
- D. $10 - 4$



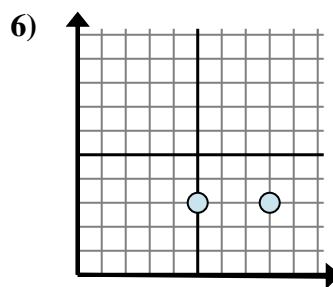
- A. $10 - 0$
- B. $0 - 10$
- C. $6 - 0$
- D. $6 - 0$



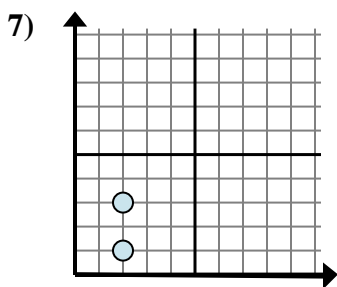
- A. $0 - 0$
- B. $0 - 0$
- C. $0 - 1$
- D. $6 - 1$



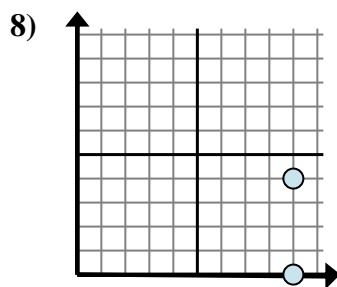
- A. $0 - 6$
- B. $0 - 0$
- C. $6 - 5$
- D. $6 - 0$



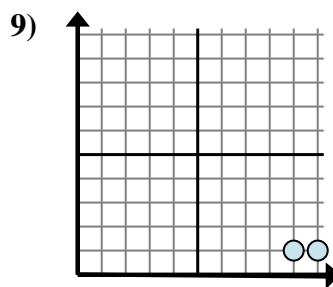
- A. $3 - 8$
- B. $8 - 3$
- C. $3 - 3$
- D. $8 - 5$



- A. $2 - 2$
- B. $3 - 2$
- C. $3 - 1$
- D. $2 - 3$



- A. $0 - 4$
- B. $9 - 4$
- C. $4 - 0$
- D. $9 - 9$



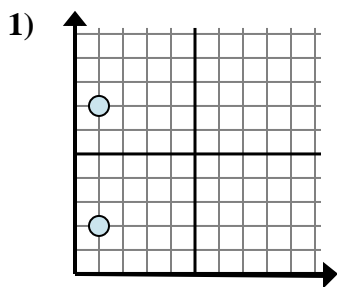
- A. $1 - 9$
- B. $10 - 9$
- C. $1 - 9$
- D. $9 - 1$

- 1. **A**
- 2. **D**
- 3. **A**
- 4. **D**
- 5. **C**
- 6. **D**
- 7. **C**
- 8. **C**
- 9. **B**

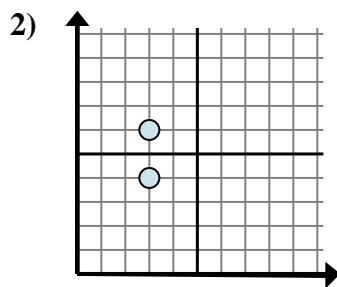


Determine which expression best shows the distance between the two points.

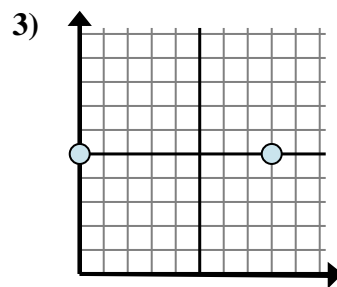
Answers



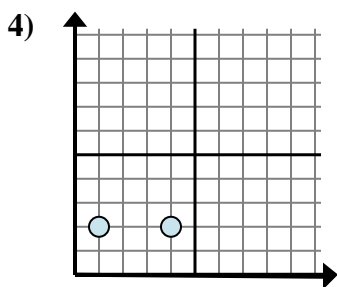
- A. $1 - 2$
- B. $7 - 2$
- C. $2 - 1$
- D. $2 - 7$



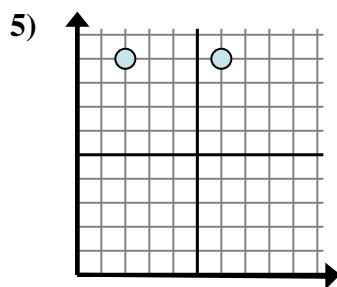
- A. $6 - 3$
- B. $3 - 6$
- C. $6 - 4$
- D. $3 - 3$



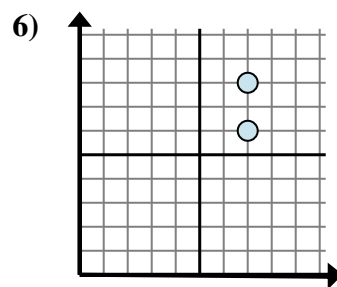
- A. $8 - 0$
- B. $0 - 5$
- C. $5 - 5$
- D. $0 - 8$



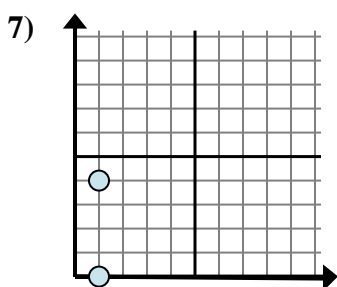
- A. $2 - 4$
- B. $4 - 1$
- C. $2 - 2$
- D. $1 - 4$



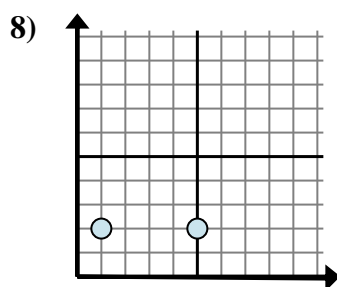
- A. $9 - 9$
- B. $2 - 6$
- C. $9 - 9$
- D. $6 - 2$



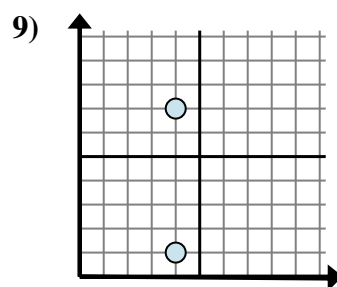
- A. $7 - 7$
- B. $6 - 8$
- C. $7 - 7$
- D. $8 - 6$



- A. $1 - 1$
- B. $4 - 1$
- C. $1 - 1$
- D. $4 - 0$



- A. $1 - 5$
- B. $5 - 1$
- C. $1 - 2$
- D. $2 - 1$

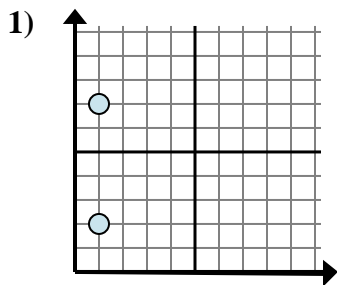


- A. $4 - 4$
- B. $7 - 4$
- C. $4 - 1$
- D. $7 - 1$

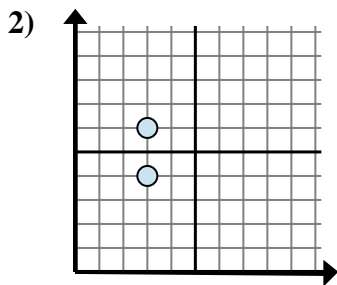
1. _____
2. _____
3. _____
4. _____
5. _____
6. _____
7. _____
8. _____
9. _____



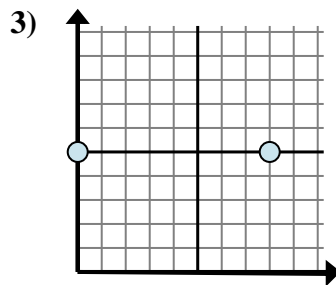
Determine which expression best shows the distance between the two points.



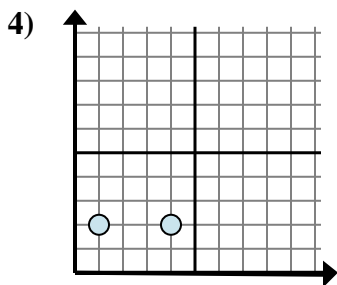
- A. $1 - 2$
- B. $7 - 2$
- C. $2 - 1$
- D. $2 - 7$



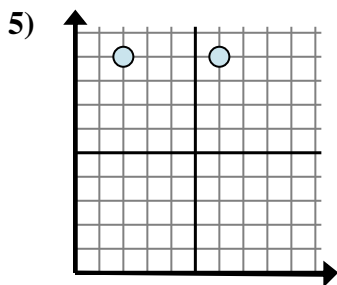
- A. $6 - 3$
- B. $3 - 6$
- C. $6 - 4$
- D. $3 - 3$



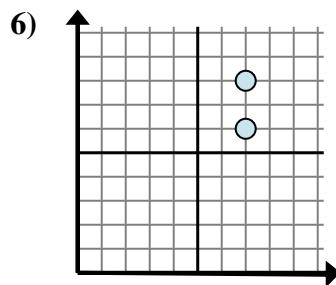
- A. $8 - 0$
- B. $0 - 5$
- C. $5 - 5$
- D. $0 - 8$



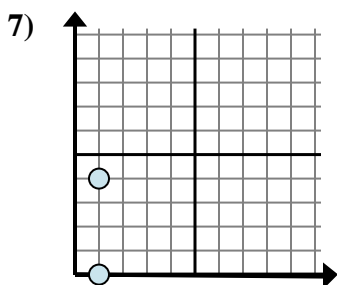
- A. $2 - 4$
- B. $4 - 1$
- C. $2 - 2$
- D. $1 - 4$



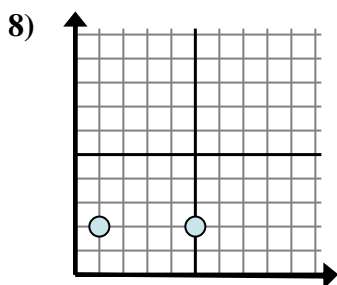
- A. $9 - 9$
- B. $2 - 6$
- C. $9 - 9$
- D. $6 - 2$



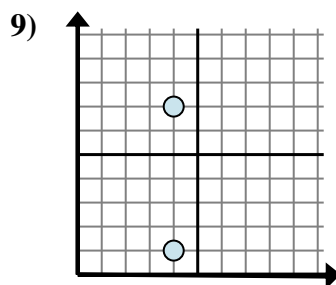
- A. $7 - 7$
- B. $6 - 8$
- C. $7 - 7$
- D. $8 - 6$



- A. $1 - 1$
- B. $4 - 1$
- C. $1 - 1$
- D. $4 - 0$



- A. $1 - 5$
- B. $5 - 1$
- C. $1 - 2$
- D. $2 - 1$



- A. $4 - 4$
- B. $7 - 4$
- C. $4 - 1$
- D. $7 - 1$

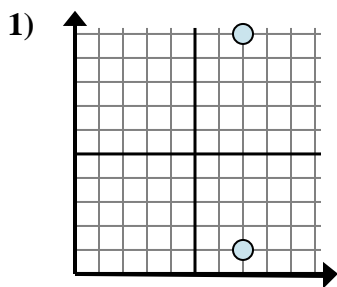
Answers

- 1. **B**
- 2. **C**
- 3. **A**
- 4. **B**
- 5. **D**
- 6. **D**
- 7. **D**
- 8. **B**
- 9. **D**

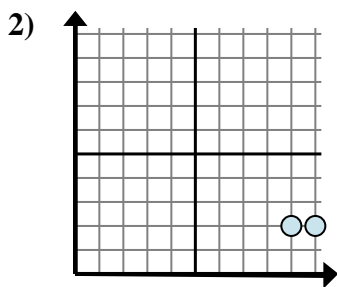


Determine which expression best shows the distance between the two points.

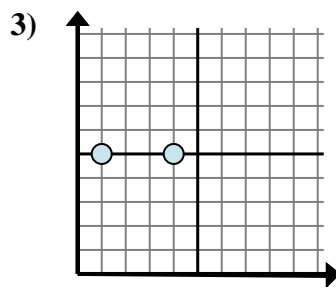
Answers



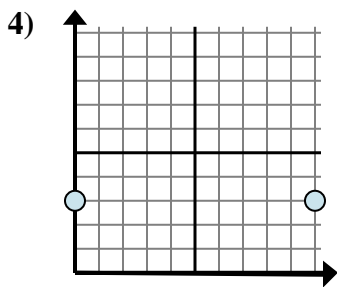
- A. $7 - 1$
- B. $10 - 7$
- C. $7 - 1$
- D. $10 - 1$



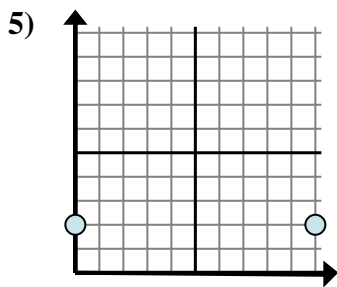
- A. $10 - 9$
- B. $2 - 2$
- C. $2 - 2$
- D. $9 - 2$



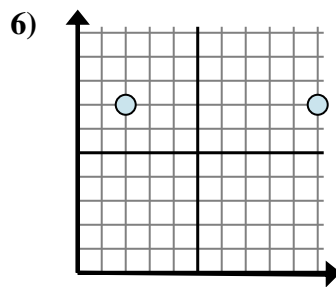
- A. $4 - 1$
- B. $1 - 5$
- C. $5 - 1$
- D. $4 - 5$



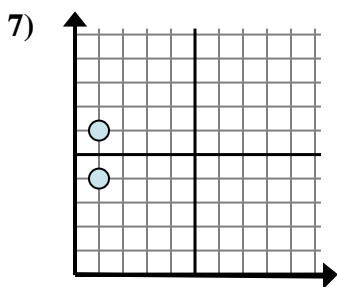
- A. $10 - 3$
- B. $10 - 0$
- C. $3 - 0$
- D. $3 - 3$



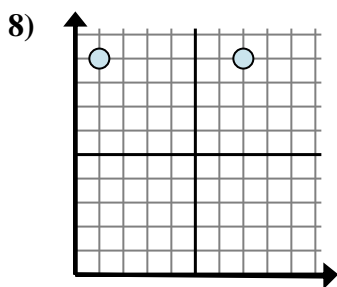
- A. $2 - 2$
- B. $10 - 2$
- C. $2 - 0$
- D. $10 - 0$



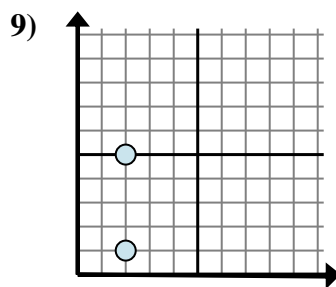
- A. $10 - 2$
- B. $7 - 2$
- C. $2 - 10$
- D. $10 - 7$



- A. $1 - 4$
- B. $6 - 1$
- C. $1 - 4$
- D. $6 - 4$



- A. $1 - 9$
- B. $7 - 1$
- C. $1 - 7$
- D. $7 - 9$

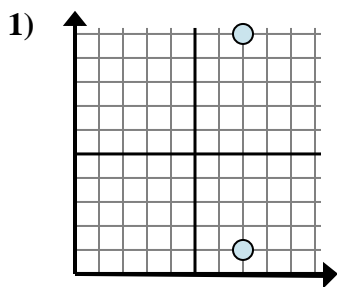


- A. $5 - 1$
- B. $2 - 2$
- C. $5 - 2$
- D. $2 - 1$

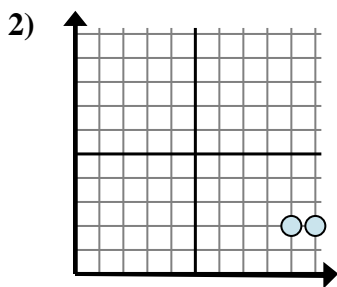
1. _____
2. _____
3. _____
4. _____
5. _____
6. _____
7. _____
8. _____
9. _____



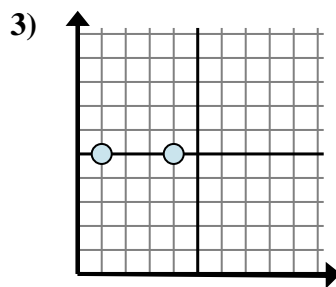
Determine which expression best shows the distance between the two points.



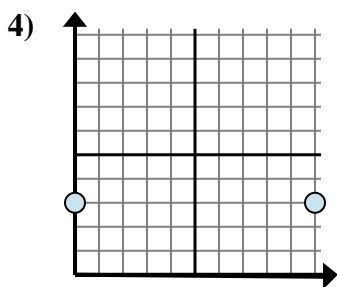
- A. $7 - 1$
- B. $10 - 7$
- C. $7 - 1$
- D. $10 - 1$



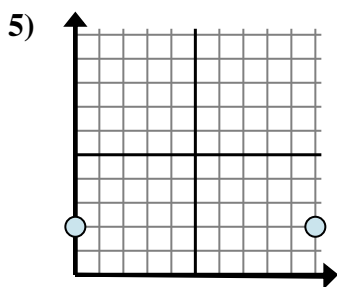
- A. $10 - 9$
- B. $2 - 2$
- C. $2 - 2$
- D. $9 - 2$



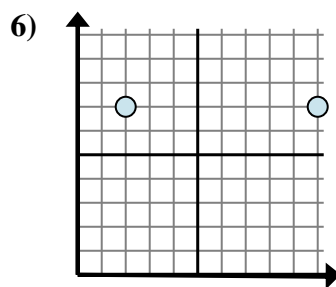
- A. $4 - 1$
- B. $1 - 5$
- C. $5 - 1$
- D. $4 - 5$



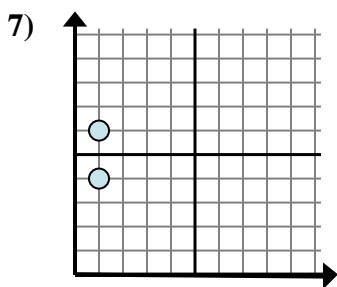
- A. $10 - 3$
- B. $10 - 0$
- C. $3 - 0$
- D. $3 - 3$



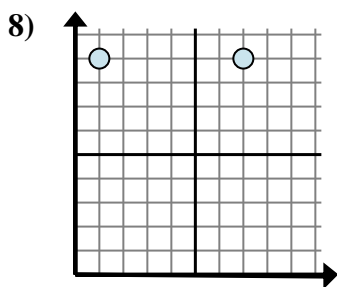
- A. $2 - 2$
- B. $10 - 2$
- C. $2 - 0$
- D. $10 - 0$



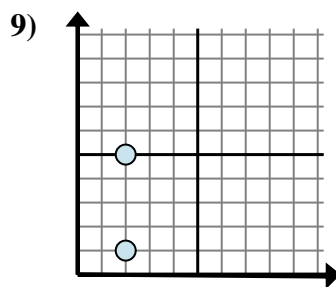
- A. $10 - 2$
- B. $7 - 2$
- C. $2 - 10$
- D. $10 - 7$



- A. $1 - 4$
- B. $6 - 1$
- C. $1 - 4$
- D. $6 - 4$



- A. $1 - 9$
- B. $7 - 1$
- C. $1 - 7$
- D. $7 - 9$



- A. $5 - 1$
- B. $2 - 2$
- C. $5 - 2$
- D. $2 - 1$

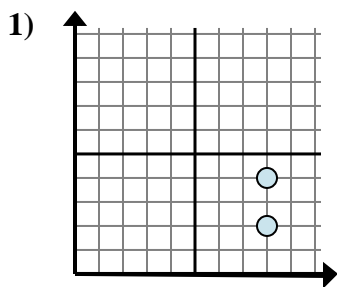
Answers

- 1. **D**
- 2. **A**
- 3. **A**
- 4. **B**
- 5. **D**
- 6. **A**
- 7. **D**
- 8. **B**
- 9. **A**

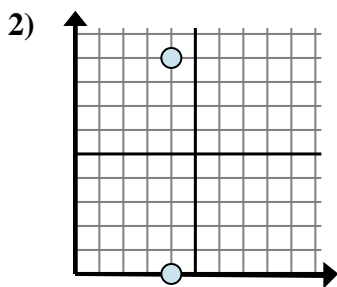


Determine which expression best shows the distance between the two points.

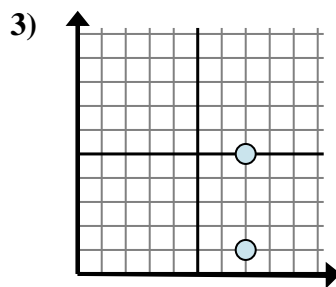
Answers



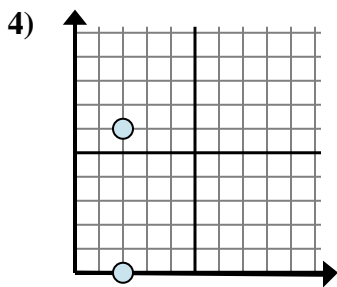
- A. $8 - 8$
- B. $4 - 2$
- C. $4 - 8$
- D. $8 - 4$



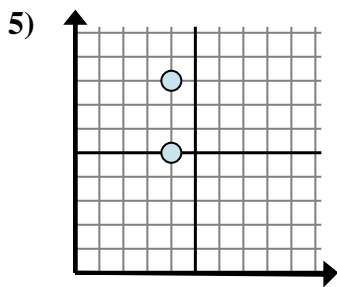
- A. $0 - 4$
- B. $4 - 4$
- C. $9 - 0$
- D. $4 - 4$



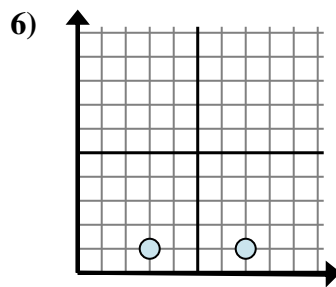
- A. $1 - 7$
- B. $1 - 5$
- C. $5 - 7$
- D. $5 - 1$



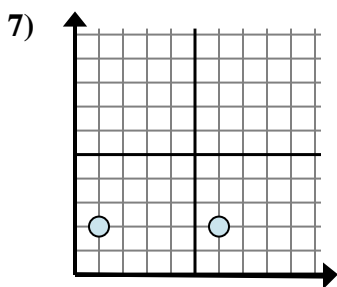
- A. $2 - 0$
- B. $6 - 0$
- C. $6 - 2$
- D. $2 - 2$



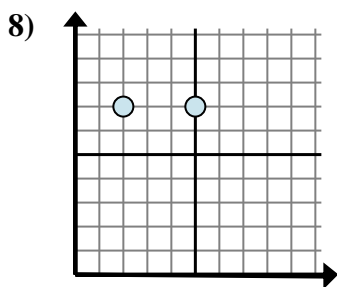
- A. $5 - 4$
- B. $8 - 5$
- C. $4 - 4$
- D. $5 - 8$



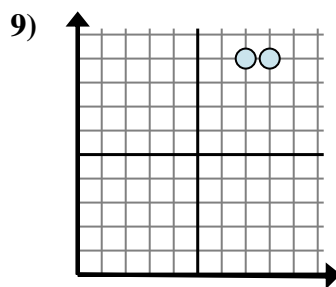
- A. $7 - 1$
- B. $7 - 3$
- C. $1 - 3$
- D. $3 - 1$



- A. $2 - 2$
- B. $2 - 6$
- C. $6 - 1$
- D. $1 - 2$



- A. $5 - 7$
- B. $5 - 2$
- C. $2 - 7$
- D. $7 - 7$

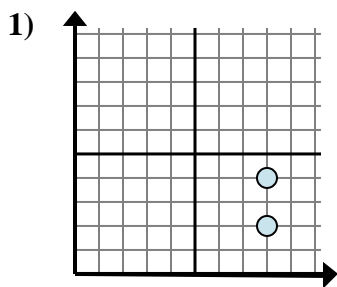


- A. $9 - 7$
- B. $8 - 7$
- C. $9 - 9$
- D. $7 - 8$

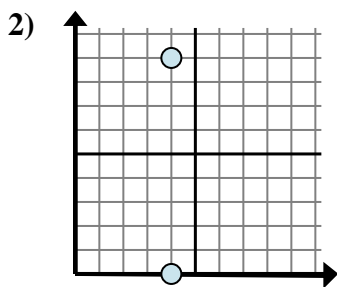
1. _____
2. _____
3. _____
4. _____
5. _____
6. _____
7. _____
8. _____
9. _____



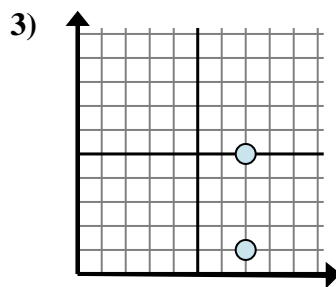
Determine which expression best shows the distance between the two points.



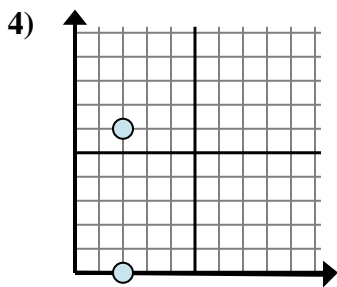
- A. $8 - 8$
- B. $4 - 2$
- C. $4 - 8$
- D. $8 - 4$



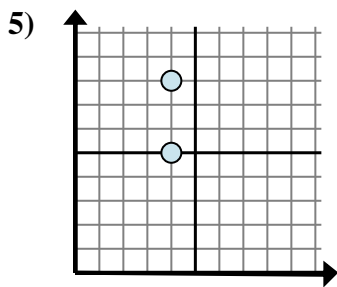
- A. $0 - 4$
- B. $4 - 4$
- C. $9 - 0$
- D. $4 - 4$



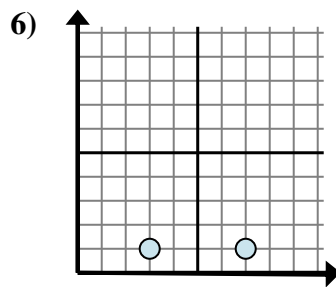
- A. $1 - 7$
- B. $1 - 5$
- C. $5 - 7$
- D. $5 - 1$



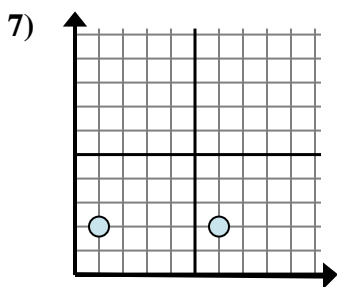
- A. $2 - 0$
- B. $6 - 0$
- C. $6 - 2$
- D. $2 - 2$



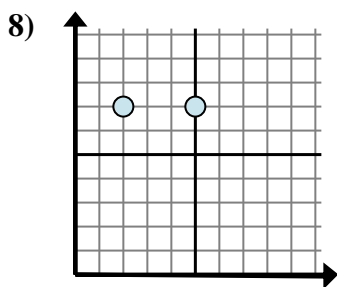
- A. $5 - 4$
- B. $8 - 5$
- C. $4 - 4$
- D. $5 - 8$



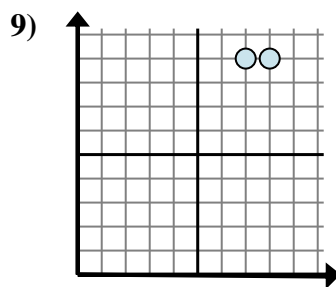
- A. $7 - 1$
- B. $7 - 3$
- C. $1 - 3$
- D. $3 - 1$



- A. $2 - 2$
- B. $2 - 6$
- C. $6 - 1$
- D. $1 - 2$



- A. $5 - 7$
- B. $5 - 2$
- C. $2 - 7$
- D. $7 - 7$



- A. $9 - 7$
- B. $8 - 7$
- C. $9 - 9$
- D. $7 - 8$

Answers

1. **B**

2. **C**

3. **D**

4. **B**

5. **B**

6. **B**

7. **C**

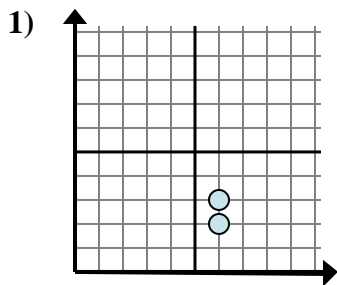
8. **B**

9. **B**

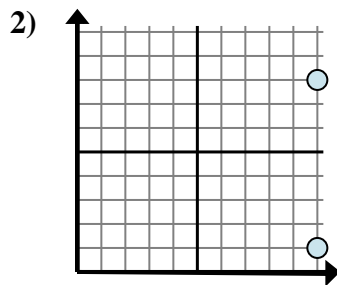


Determine which expression best shows the distance between the two points.

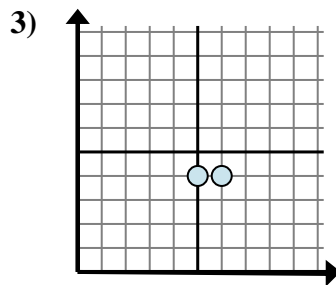
Answers



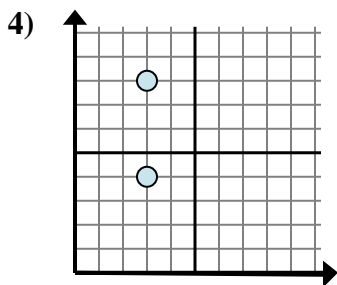
- A. $3 - 2$
- B. $6 - 6$
- C. $3 - 6$
- D. $2 - 3$



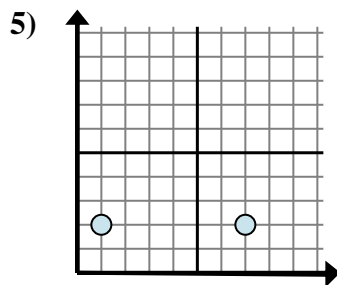
- A. $10 - 10$
- B. $10 - 8$
- C. $8 - 10$
- D. $8 - 1$



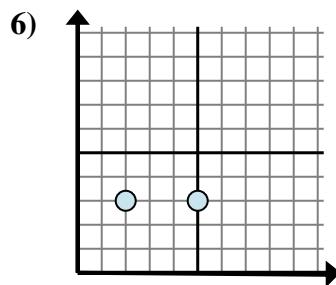
- A. $6 - 5$
- B. $4 - 4$
- C. $5 - 4$
- D. $6 - 4$



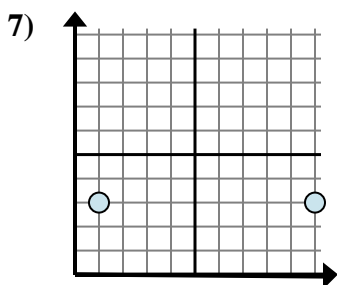
- A. $3 - 3$
- B. $3 - 4$
- C. $8 - 4$
- D. $4 - 8$



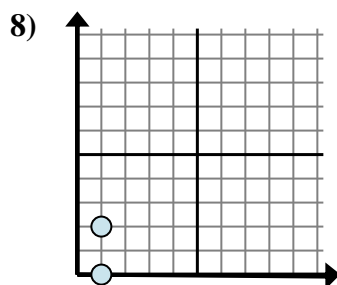
- A. $1 - 2$
- B. $2 - 2$
- C. $7 - 1$
- D. $2 - 2$



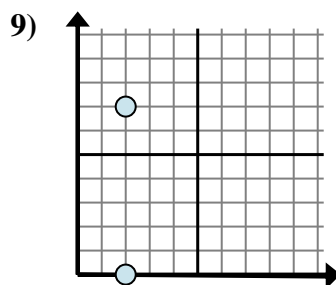
- A. $3 - 5$
- B. $2 - 5$
- C. $5 - 2$
- D. $3 - 5$



- A. $10 - 1$
- B. $3 - 3$
- C. $1 - 3$
- D. $3 - 10$



- A. $2 - 0$
- B. $1 - 0$
- C. $1 - 1$
- D. $2 - 1$

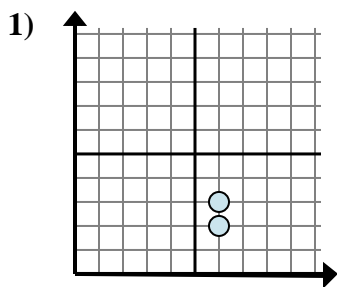


- A. $2 - 2$
- B. $0 - 2$
- C. $7 - 0$
- D. $2 - 7$

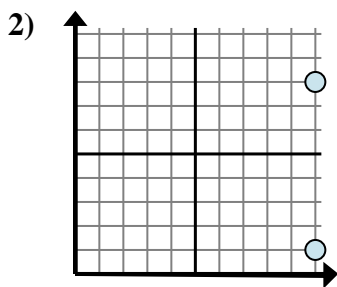
1. _____
2. _____
3. _____
4. _____
5. _____
6. _____
7. _____
8. _____
9. _____



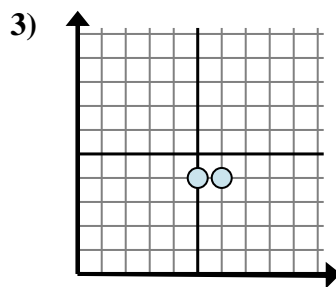
Determine which expression best shows the distance between the two points.



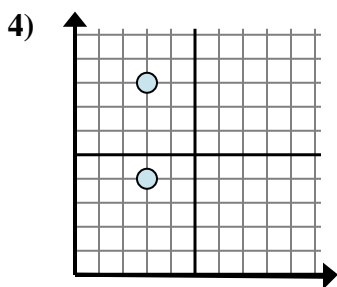
- A. $3 - 2$
- B. $6 - 6$
- C. $3 - 6$
- D. $2 - 3$



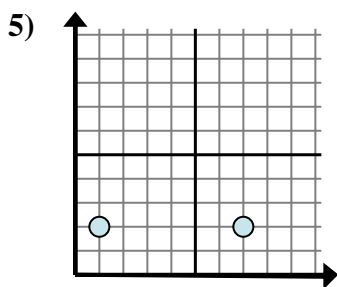
- A. $10 - 10$
- B. $10 - 8$
- C. $8 - 10$
- D. $8 - 1$



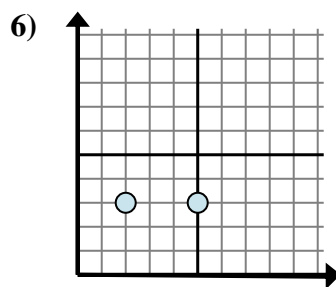
- A. $6 - 5$
- B. $4 - 4$
- C. $5 - 4$
- D. $6 - 4$



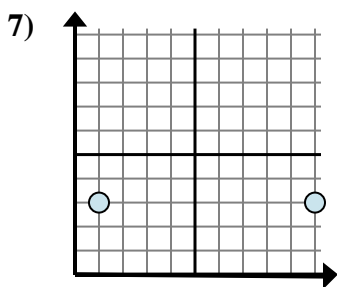
- A. $3 - 3$
- B. $3 - 4$
- C. $8 - 4$
- D. $4 - 8$



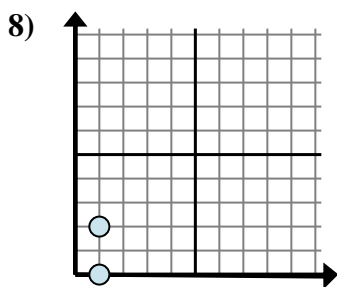
- A. $1 - 2$
- B. $2 - 2$
- C. $7 - 1$
- D. $2 - 2$



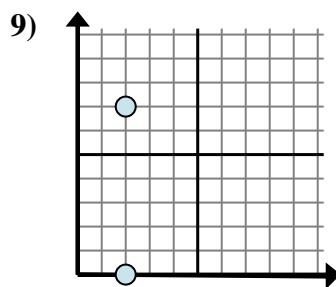
- A. $3 - 5$
- B. $2 - 5$
- C. $5 - 2$
- D. $3 - 5$



- A. $10 - 1$
- B. $3 - 3$
- C. $1 - 3$
- D. $3 - 10$



- A. $2 - 0$
- B. $1 - 0$
- C. $1 - 1$
- D. $2 - 1$



- A. $2 - 2$
- B. $0 - 2$
- C. $7 - 0$
- D. $2 - 7$

Answers

1. **A**

2. **D**

3. **A**

4. **C**

5. **C**

6. **C**

7. **A**

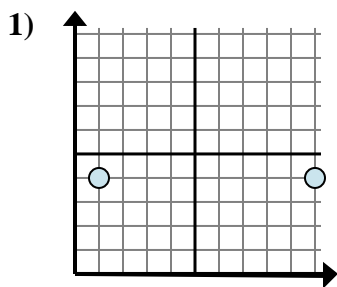
8. **A**

9. **C**

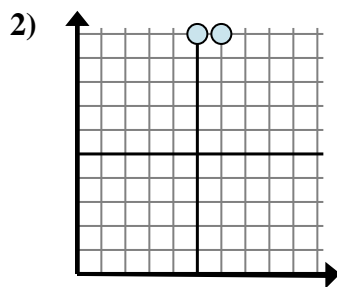


Determine which expression best shows the distance between the two points.

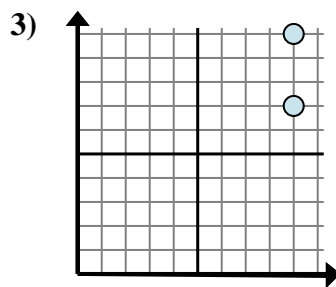
Answers



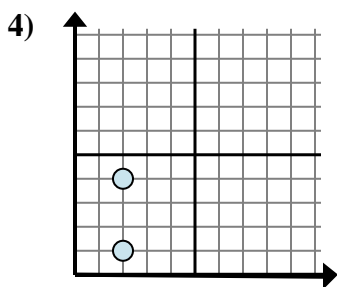
- A. $4 - 4$
- B. $4 - 4$
- C. $4 - 10$
- D. $10 - 1$



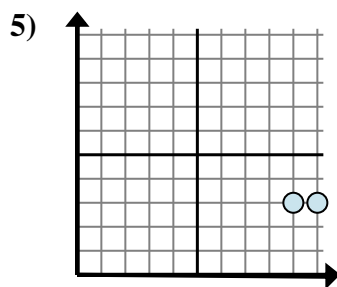
- A. $6 - 10$
- B. $5 - 10$
- C. $6 - 5$
- D. $10 - 5$



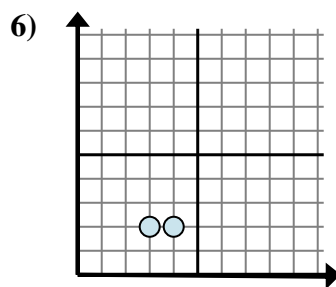
- A. $10 - 7$
- B. $9 - 9$
- C. $7 - 10$
- D. $9 - 7$



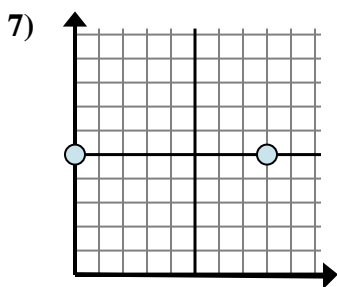
- A. $2 - 4$
- B. $4 - 1$
- C. $1 - 4$
- D. $2 - 2$



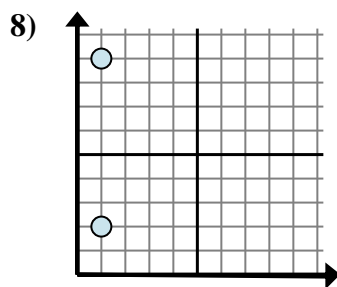
- A. $9 - 10$
- B. $10 - 3$
- C. $3 - 9$
- D. $10 - 9$



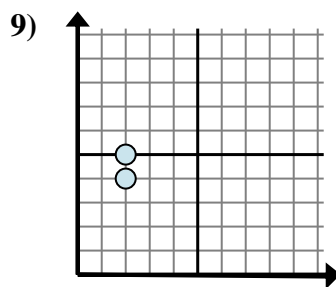
- A. $3 - 2$
- B. $2 - 4$
- C. $2 - 4$
- D. $4 - 3$



- A. $5 - 8$
- B. $5 - 5$
- C. $8 - 0$
- D. $8 - 5$



- A. $1 - 1$
- B. $1 - 2$
- C. $9 - 2$
- D. $2 - 9$

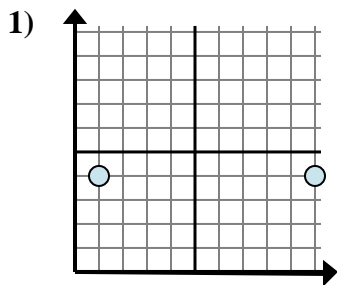


- A. $5 - 2$
- B. $5 - 4$
- C. $2 - 2$
- D. $2 - 2$

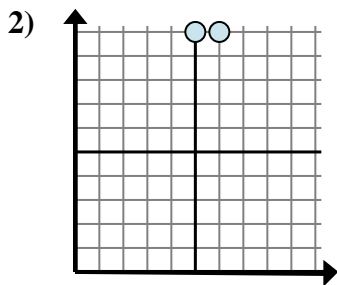
1. _____
2. _____
3. _____
4. _____
5. _____
6. _____
7. _____
8. _____
9. _____



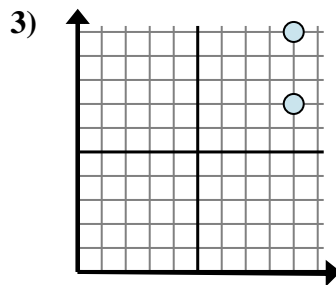
Determine which expression best shows the distance between the two points.



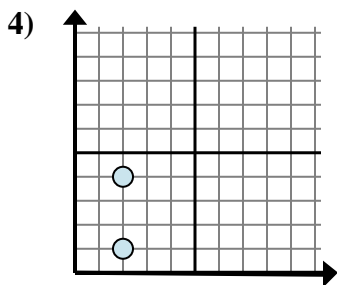
- A. $4 - 4$
- B. $4 - 4$
- C. $4 - 10$
- D. $10 - 1$



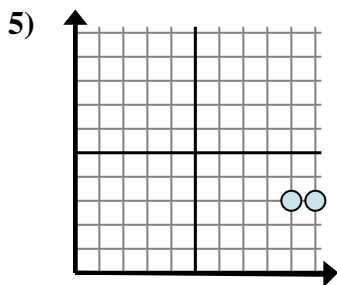
- A. $6 - 10$
- B. $5 - 10$
- C. $6 - 5$
- D. $10 - 5$



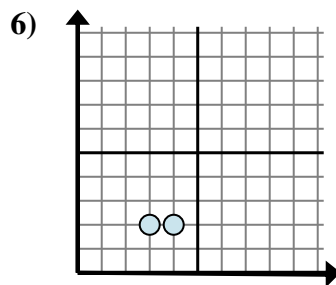
- A. $10 - 7$
- B. $9 - 9$
- C. $7 - 10$
- D. $9 - 7$



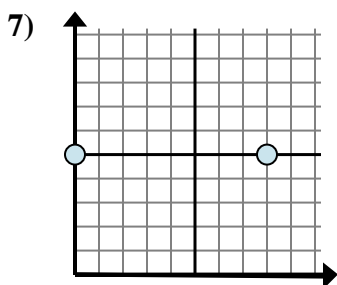
- A. $2 - 4$
- B. $4 - 1$
- C. $1 - 4$
- D. $2 - 2$



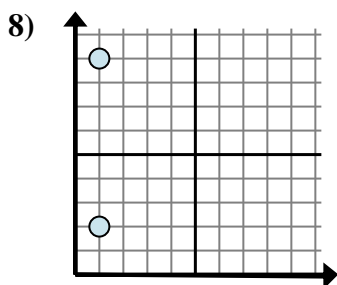
- A. $9 - 10$
- B. $10 - 3$
- C. $3 - 9$
- D. $10 - 9$



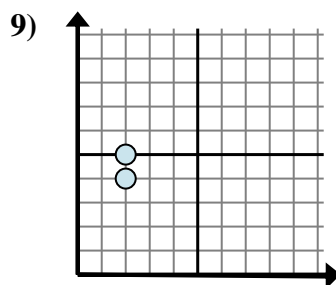
- A. $3 - 2$
- B. $2 - 4$
- C. $2 - 4$
- D. $4 - 3$



- A. $5 - 8$
- B. $5 - 5$
- C. $8 - 0$
- D. $8 - 5$



- A. $1 - 1$
- B. $1 - 2$
- C. $9 - 2$
- D. $2 - 9$



- A. $5 - 2$
- B. $5 - 4$
- C. $2 - 2$
- D. $2 - 2$

Answers

1. **D**

2. **C**

3. **A**

4. **B**

5. **D**

6. **D**

7. **C**

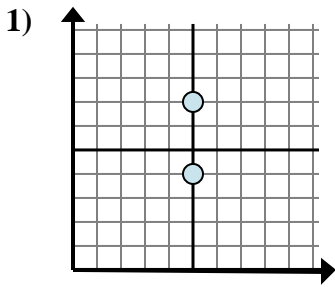
8. **C**

9. **B**

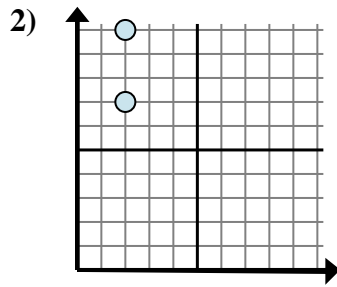


Determine which expression best shows the distance between the two points.

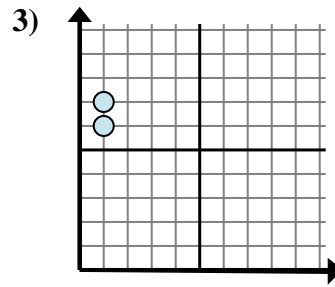
Answers



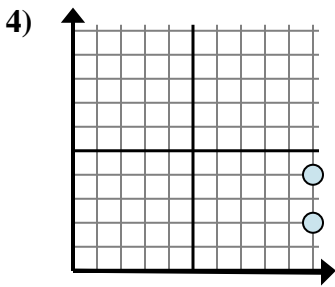
- A. $5 - 5$
- B. $7 - 4$
- C. $7 - 5$
- D. $5 - 4$



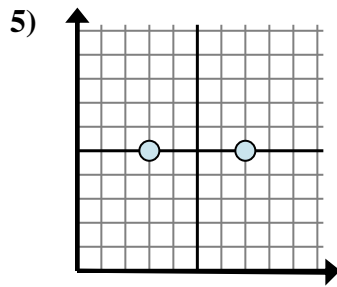
- A. $10 - 2$
- B. $2 - 10$
- C. $2 - 2$
- D. $10 - 7$



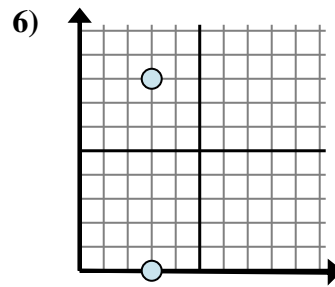
- A. $7 - 6$
- B. $1 - 6$
- C. $6 - 1$
- D. $1 - 1$



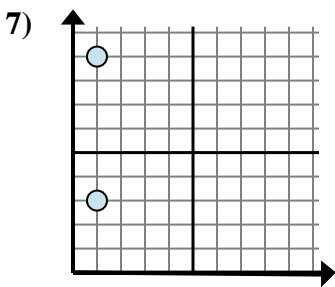
- A. $10 - 4$
- B. $10 - 4$
- C. $2 - 10$
- D. $4 - 2$



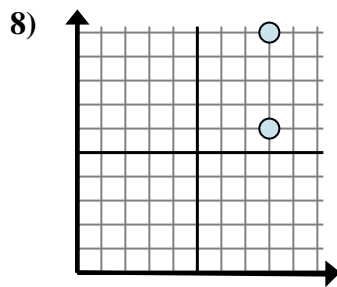
- A. $7 - 5$
- B. $7 - 3$
- C. $5 - 7$
- D. $3 - 7$



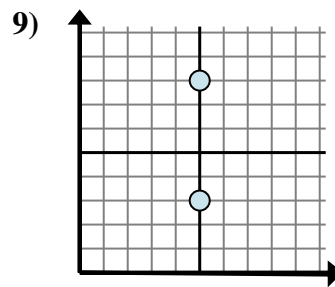
- A. $3 - 3$
- B. $8 - 0$
- C. $3 - 0$
- D. $0 - 8$



- A. $9 - 1$
- B. $9 - 3$
- C. $1 - 1$
- D. $1 - 1$



- A. $8 - 6$
- B. $8 - 6$
- C. $10 - 8$
- D. $10 - 6$



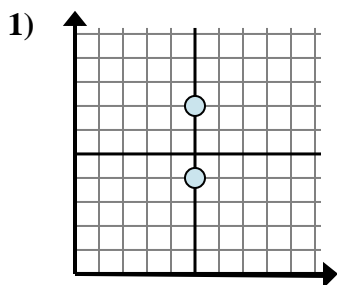
- A. $8 - 3$
- B. $5 - 5$
- C. $8 - 5$
- D. $5 - 8$

- 1. _____
- 2. _____
- 3. _____
- 4. _____
- 5. _____
- 6. _____
- 7. _____
- 8. _____
- 9. _____

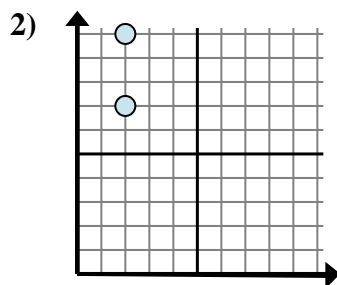


Determine which expression best shows the distance between the two points.

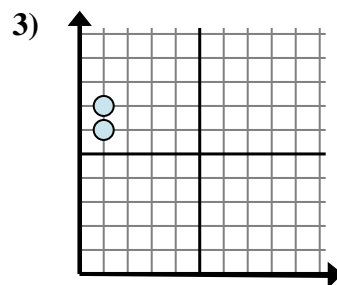
Answers



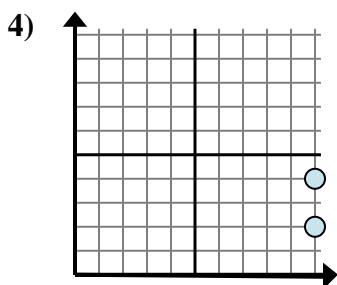
- A. $5 - 5$
- B. $7 - 4$
- C. $7 - 5$
- D. $5 - 4$



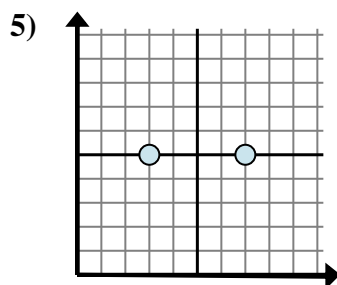
- A. $10 - 2$
- B. $2 - 10$
- C. $2 - 2$
- D. $10 - 7$



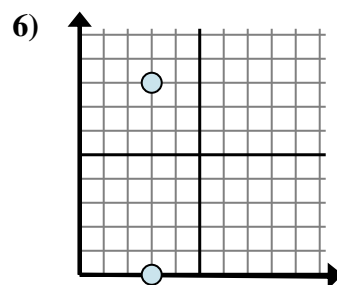
- A. $7 - 6$
- B. $1 - 6$
- C. $6 - 1$
- D. $1 - 1$



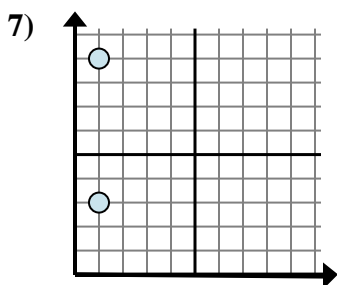
- A. $10 - 4$
- B. $10 - 4$
- C. $2 - 10$
- D. $4 - 2$



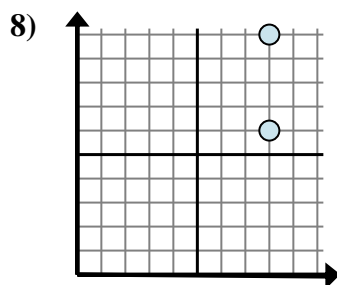
- A. $7 - 5$
- B. $7 - 3$
- C. $5 - 7$
- D. $3 - 7$



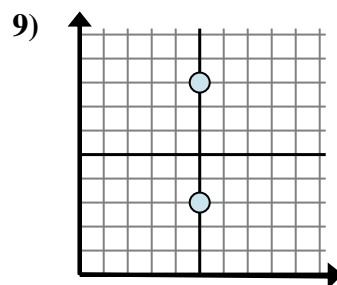
- A. $3 - 3$
- B. $8 - 0$
- C. $3 - 0$
- D. $0 - 8$



- A. $9 - 1$
- B. $9 - 3$
- C. $1 - 1$
- D. $1 - 1$



- A. $8 - 6$
- B. $8 - 6$
- C. $10 - 8$
- D. $10 - 6$



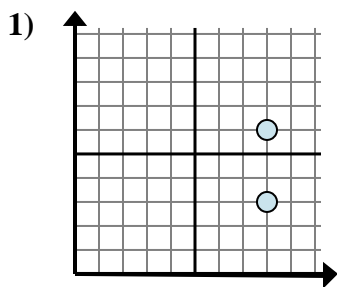
- A. $8 - 3$
- B. $5 - 5$
- C. $8 - 5$
- D. $5 - 8$

- 1. **B**
- 2. **D**
- 3. **A**
- 4. **D**
- 5. **B**
- 6. **B**
- 7. **B**
- 8. **D**
- 9. **A**

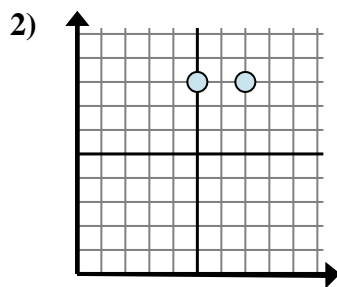


Determine which expression best shows the distance between the two points.

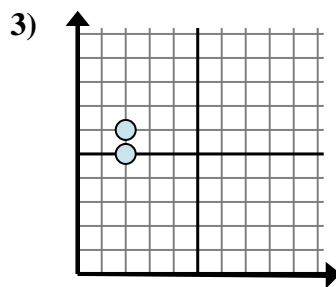
Answers



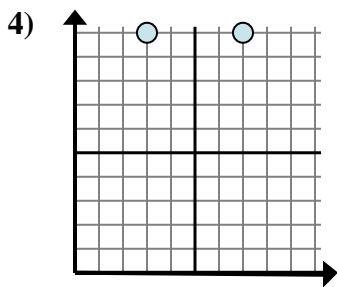
- A. $6 - 3$
- B. $6 - 8$
- C. $8 - 8$
- D. $3 - 8$



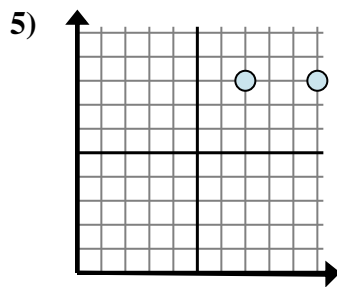
- A. $8 - 7$
- B. $7 - 5$
- C. $8 - 7$
- D. $8 - 8$



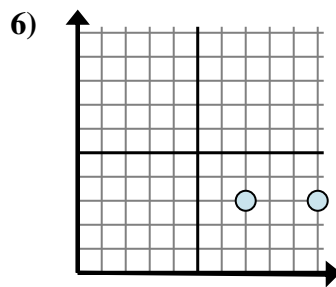
- A. $6 - 5$
- B. $2 - 5$
- C. $5 - 2$
- D. $6 - 2$



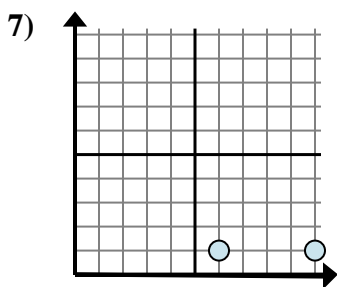
- A. $7 - 3$
- B. $10 - 3$
- C. $10 - 3$
- D. $10 - 10$



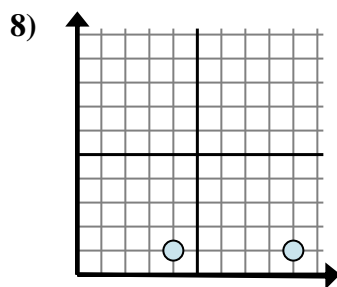
- A. $8 - 8$
- B. $10 - 8$
- C. $7 - 8$
- D. $10 - 7$



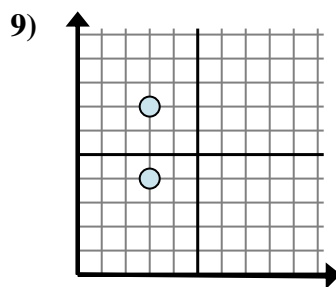
- A. $10 - 7$
- B. $7 - 3$
- C. $3 - 10$
- D. $3 - 10$



- A. $10 - 6$
- B. $6 - 1$
- C. $6 - 10$
- D. $1 - 1$



- A. $4 - 9$
- B. $9 - 4$
- C. $1 - 9$
- D. $4 - 1$



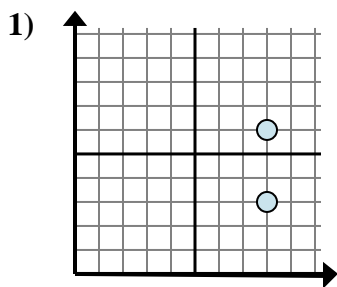
- A. $3 - 3$
- B. $4 - 3$
- C. $3 - 3$
- D. $7 - 4$

1. _____
2. _____
3. _____
4. _____
5. _____
6. _____
7. _____
8. _____
9. _____

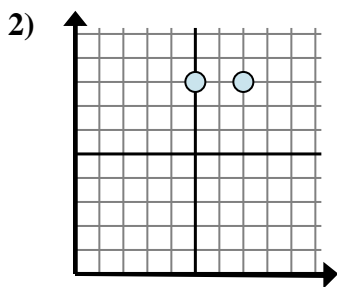


Determine which expression best shows the distance between the two points.

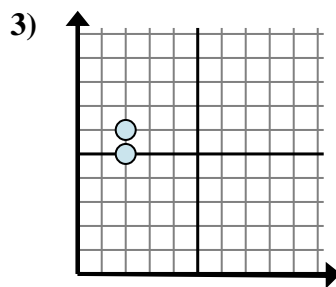
Answers



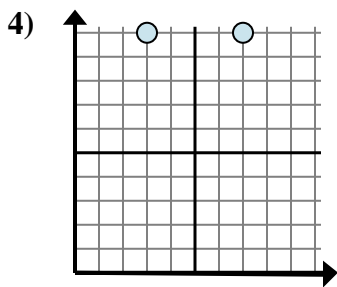
- A. $6 - 3$
- B. $6 - 8$
- C. $8 - 8$
- D. $3 - 8$



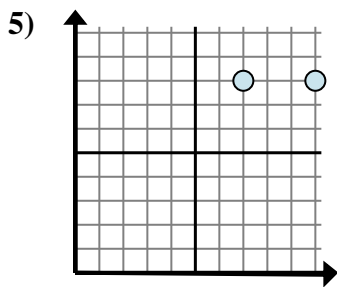
- A. $8 - 7$
- B. $7 - 5$
- C. $8 - 7$
- D. $8 - 8$



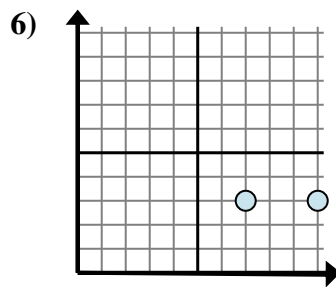
- A. $6 - 5$
- B. $2 - 5$
- C. $5 - 2$
- D. $6 - 2$



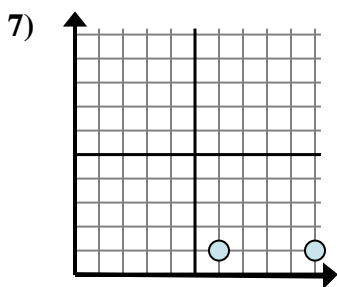
- A. $7 - 3$
- B. $10 - 3$
- C. $10 - 3$
- D. $10 - 10$



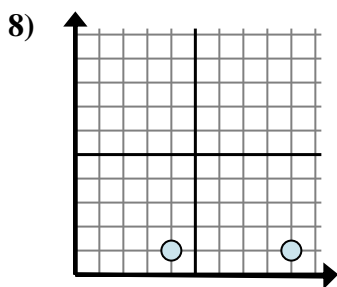
- A. $8 - 8$
- B. $10 - 8$
- C. $7 - 8$
- D. $10 - 7$



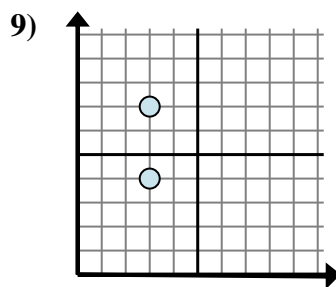
- A. $10 - 7$
- B. $7 - 3$
- C. $3 - 10$
- D. $3 - 10$



- A. $10 - 6$
- B. $6 - 1$
- C. $6 - 10$
- D. $1 - 1$



- A. $4 - 9$
- B. $9 - 4$
- C. $1 - 9$
- D. $4 - 1$



- A. $3 - 3$
- B. $4 - 3$
- C. $3 - 3$
- D. $7 - 4$

1. **A**

2. **B**

3. **A**

4. **A**

5. **D**

6. **A**

7. **A**

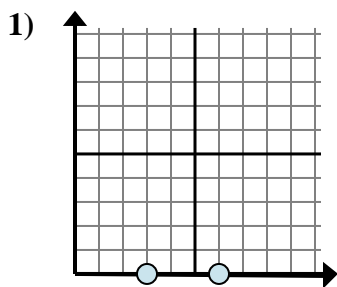
8. **B**

9. **D**

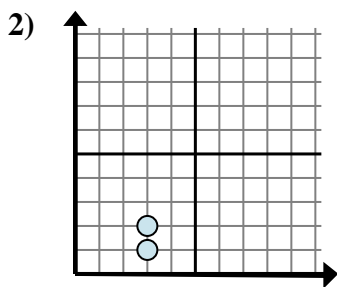


Determine which expression best shows the distance between the two points.

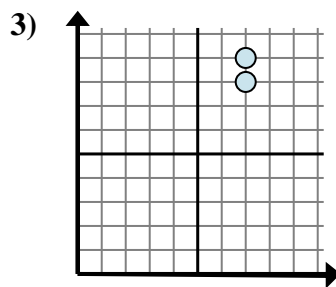
Answers



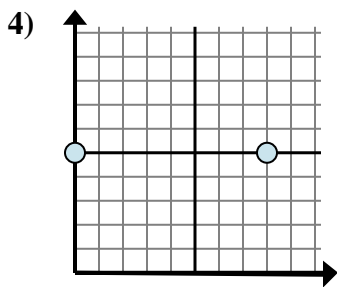
- A. $0 - 6$
- B. $3 - 0$
- C. $6 - 0$
- D. $6 - 3$



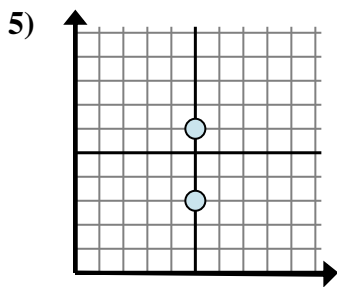
- A. $3 - 3$
- B. $3 - 2$
- C. $3 - 3$
- D. $2 - 1$



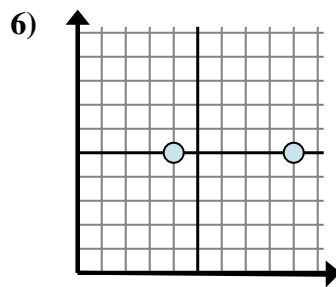
- A. $7 - 8$
- B. $7 - 7$
- C. $9 - 8$
- D. $8 - 7$



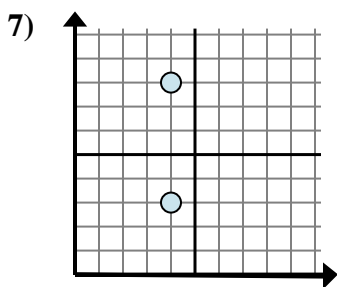
- A. $8 - 0$
- B. $5 - 5$
- C. $5 - 8$
- D. $8 - 5$



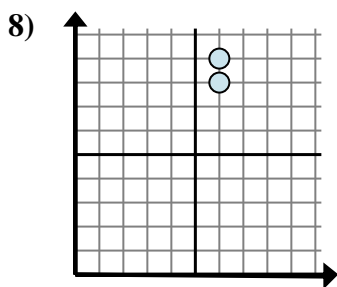
- A. $6 - 5$
- B. $6 - 3$
- C. $5 - 5$
- D. $5 - 5$



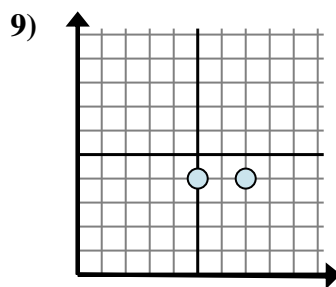
- A. $5 - 5$
- B. $9 - 4$
- C. $9 - 5$
- D. $4 - 9$



- A. $4 - 3$
- B. $8 - 3$
- C. $4 - 4$
- D. $4 - 4$



- A. $9 - 8$
- B. $6 - 6$
- C. $8 - 6$
- D. $9 - 6$

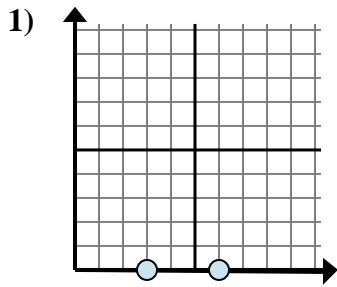


- A. $5 - 4$
- B. $4 - 4$
- C. $7 - 5$
- D. $4 - 7$

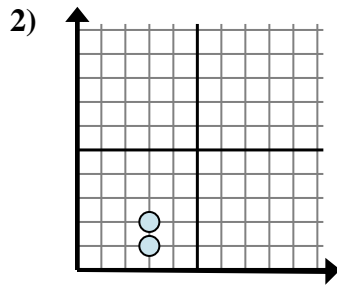
- 1. _____
- 2. _____
- 3. _____
- 4. _____
- 5. _____
- 6. _____
- 7. _____
- 8. _____
- 9. _____



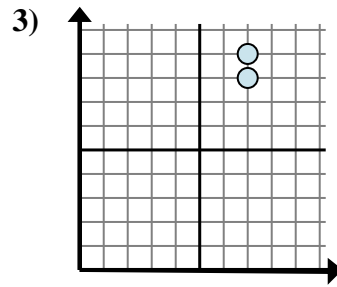
Determine which expression best shows the distance between the two points.



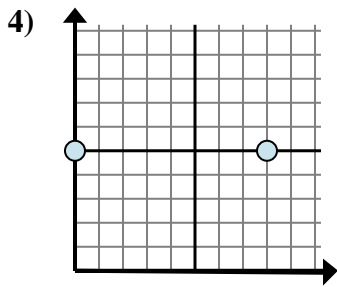
- A. $0 - 6$
- B. $3 - 0$
- C. $6 - 0$
- D. $6 - 3$



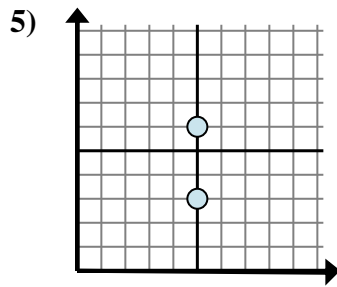
- A. $3 - 3$
- B. $3 - 2$
- C. $3 - 3$
- D. $2 - 1$



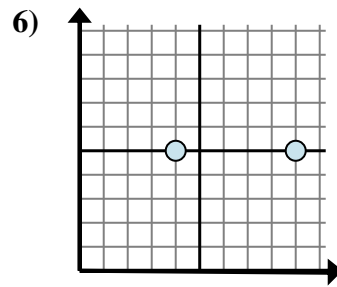
- A. $7 - 8$
- B. $7 - 7$
- C. $9 - 8$
- D. $8 - 7$



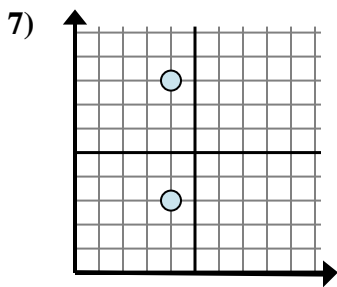
- A. $8 - 0$
- B. $5 - 5$
- C. $5 - 8$
- D. $8 - 5$



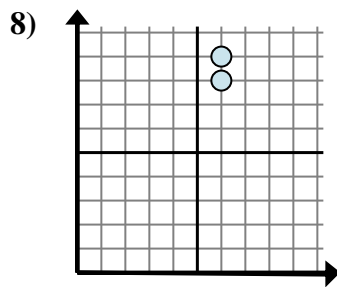
- A. $6 - 5$
- B. $6 - 3$
- C. $5 - 5$
- D. $5 - 5$



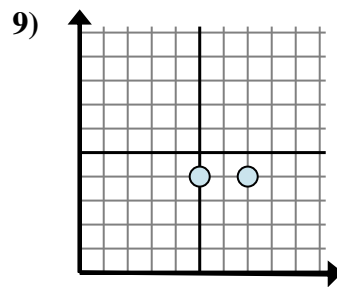
- A. $5 - 5$
- B. $9 - 4$
- C. $9 - 5$
- D. $4 - 9$



- A. $4 - 3$
- B. $8 - 3$
- C. $4 - 4$
- D. $4 - 4$



- A. $9 - 8$
- B. $6 - 6$
- C. $8 - 6$
- D. $9 - 6$



- A. $5 - 4$
- B. $4 - 4$
- C. $7 - 5$
- D. $4 - 7$

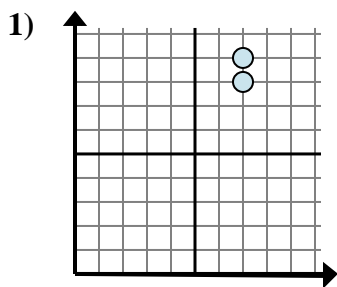
Answers

- 1. **D**
- 2. **D**
- 3. **C**
- 4. **A**
- 5. **B**
- 6. **B**
- 7. **B**
- 8. **A**
- 9. **C**

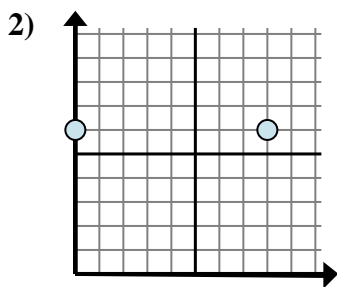


Determine which expression best shows the distance between the two points.

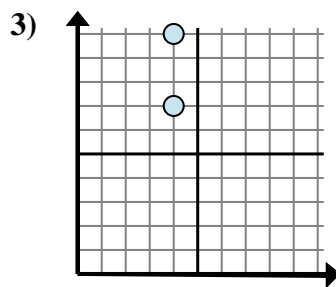
Answers



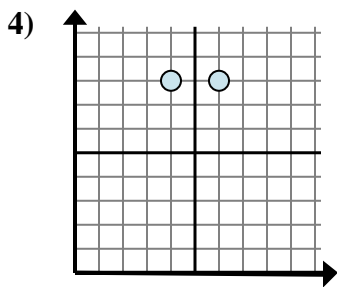
- A. $7 - 9$
- B. $8 - 9$
- C. $9 - 8$
- D. $7 - 7$



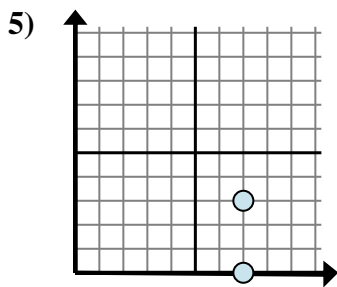
- A. $8 - 6$
- B. $8 - 0$
- C. $0 - 8$
- D. $6 - 6$



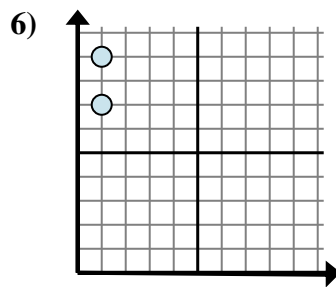
- A. $7 - 10$
- B. $4 - 7$
- C. $10 - 7$
- D. $4 - 4$



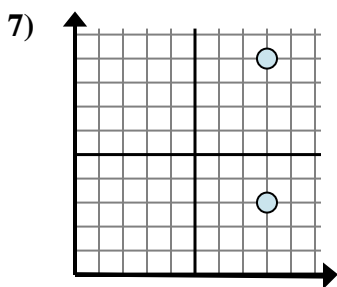
- A. $8 - 8$
- B. $4 - 8$
- C. $6 - 4$
- D. $6 - 8$



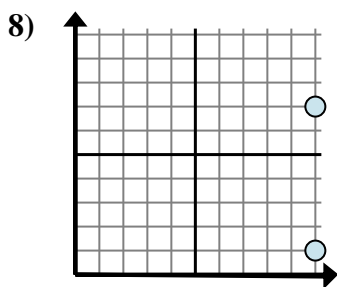
- A. $7 - 3$
- B. $3 - 0$
- C. $0 - 3$
- D. $3 - 7$



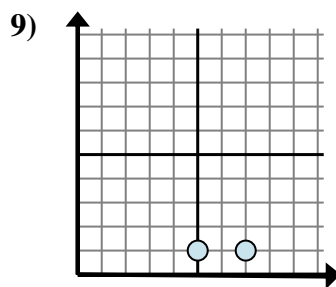
- A. $9 - 7$
- B. $7 - 9$
- C. $1 - 1$
- D. $1 - 1$



- A. $8 - 8$
- B. $3 - 9$
- C. $9 - 3$
- D. $9 - 8$



- A. $1 - 7$
- B. $7 - 10$
- C. $7 - 1$
- D. $1 - 10$

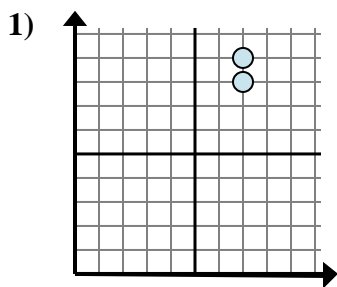


- A. $7 - 1$
- B. $1 - 1$
- C. $1 - 7$
- D. $7 - 5$

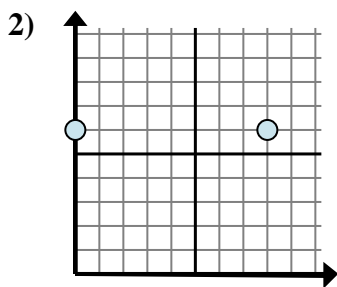
1. _____
2. _____
3. _____
4. _____
5. _____
6. _____
7. _____
8. _____
9. _____



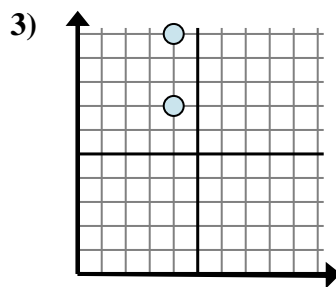
Determine which expression best shows the distance between the two points.



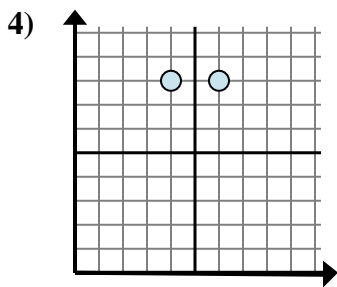
- A. $7 - 9$
- B. $8 - 9$
- C. $9 - 8$
- D. $7 - 7$



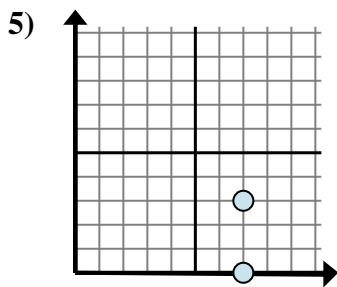
- A. $8 - 6$
- B. $8 - 0$
- C. $0 - 8$
- D. $6 - 6$



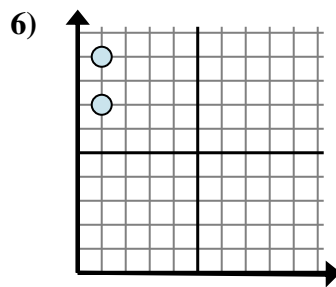
- A. $7 - 10$
- B. $4 - 7$
- C. $10 - 7$
- D. $4 - 4$



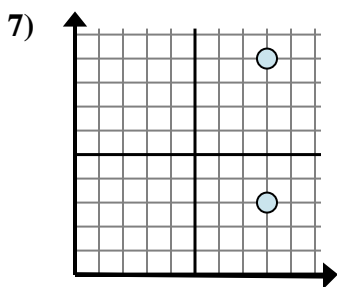
- A. $8 - 8$
- B. $4 - 8$
- C. $6 - 4$
- D. $6 - 8$



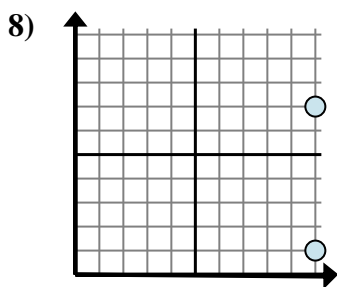
- A. $7 - 3$
- B. $3 - 0$
- C. $0 - 3$
- D. $3 - 7$



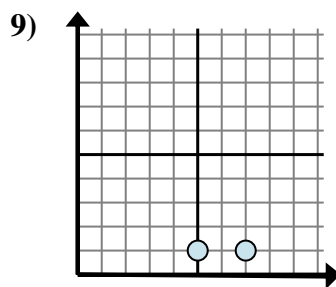
- A. $9 - 7$
- B. $7 - 9$
- C. $1 - 1$
- D. $1 - 1$



- A. $8 - 8$
- B. $3 - 9$
- C. $9 - 3$
- D. $9 - 8$



- A. $1 - 7$
- B. $7 - 10$
- C. $7 - 1$
- D. $1 - 10$



- A. $7 - 1$
- B. $1 - 1$
- C. $1 - 7$
- D. $7 - 5$

Answers

- 1. **C**
- 2. **B**
- 3. **C**
- 4. **C**
- 5. **B**
- 6. **A**
- 7. **C**
- 8. **C**
- 9. **D**