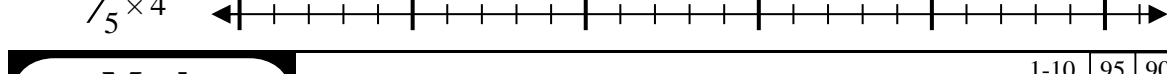
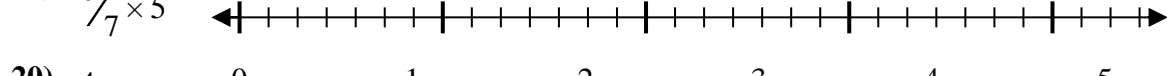
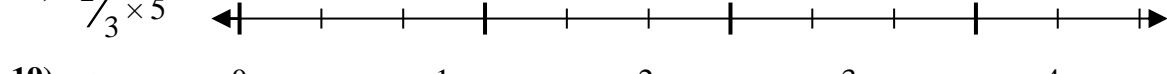
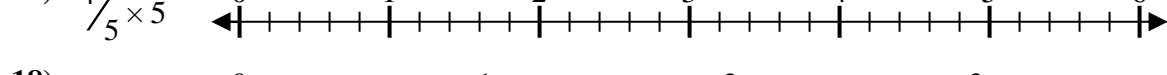
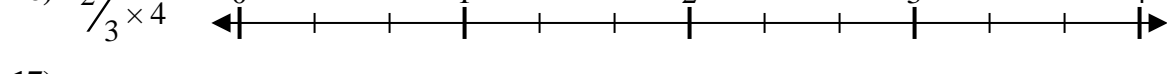
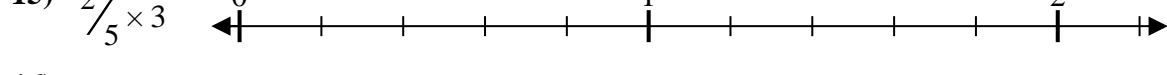
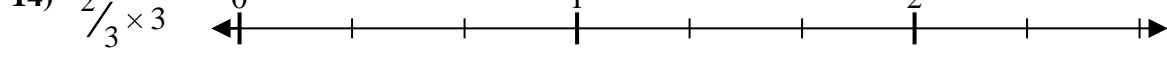
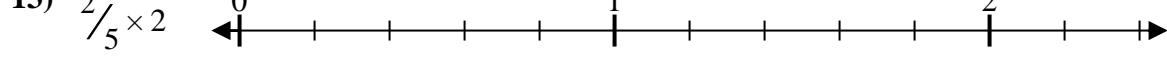
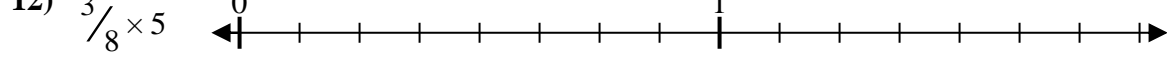
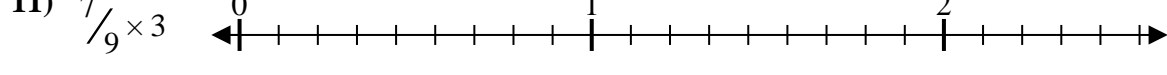
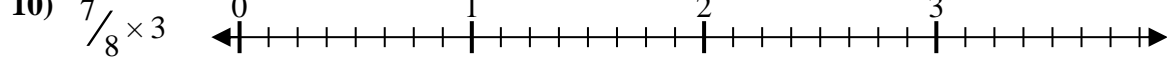
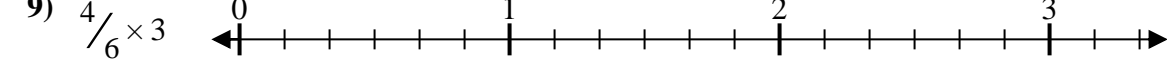
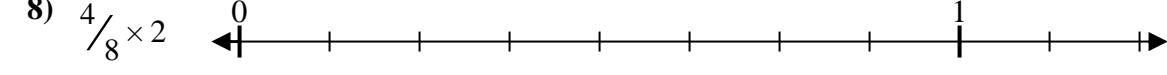
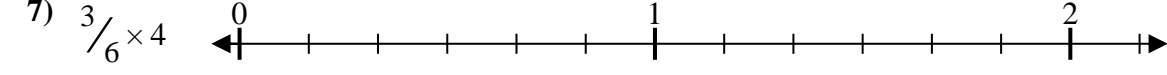
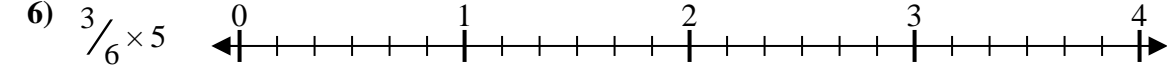

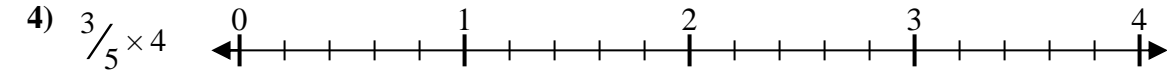
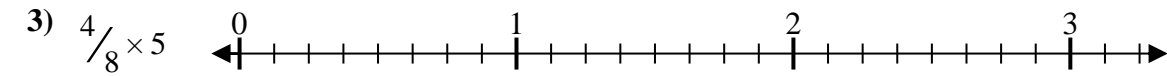
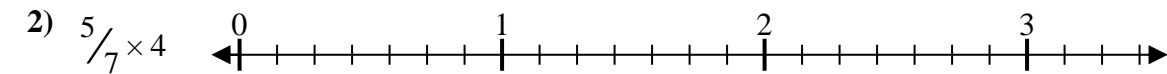
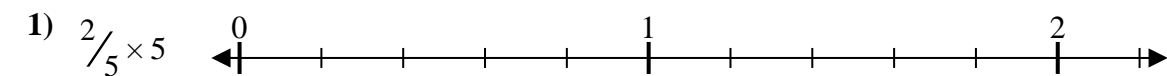




Solve each problem.

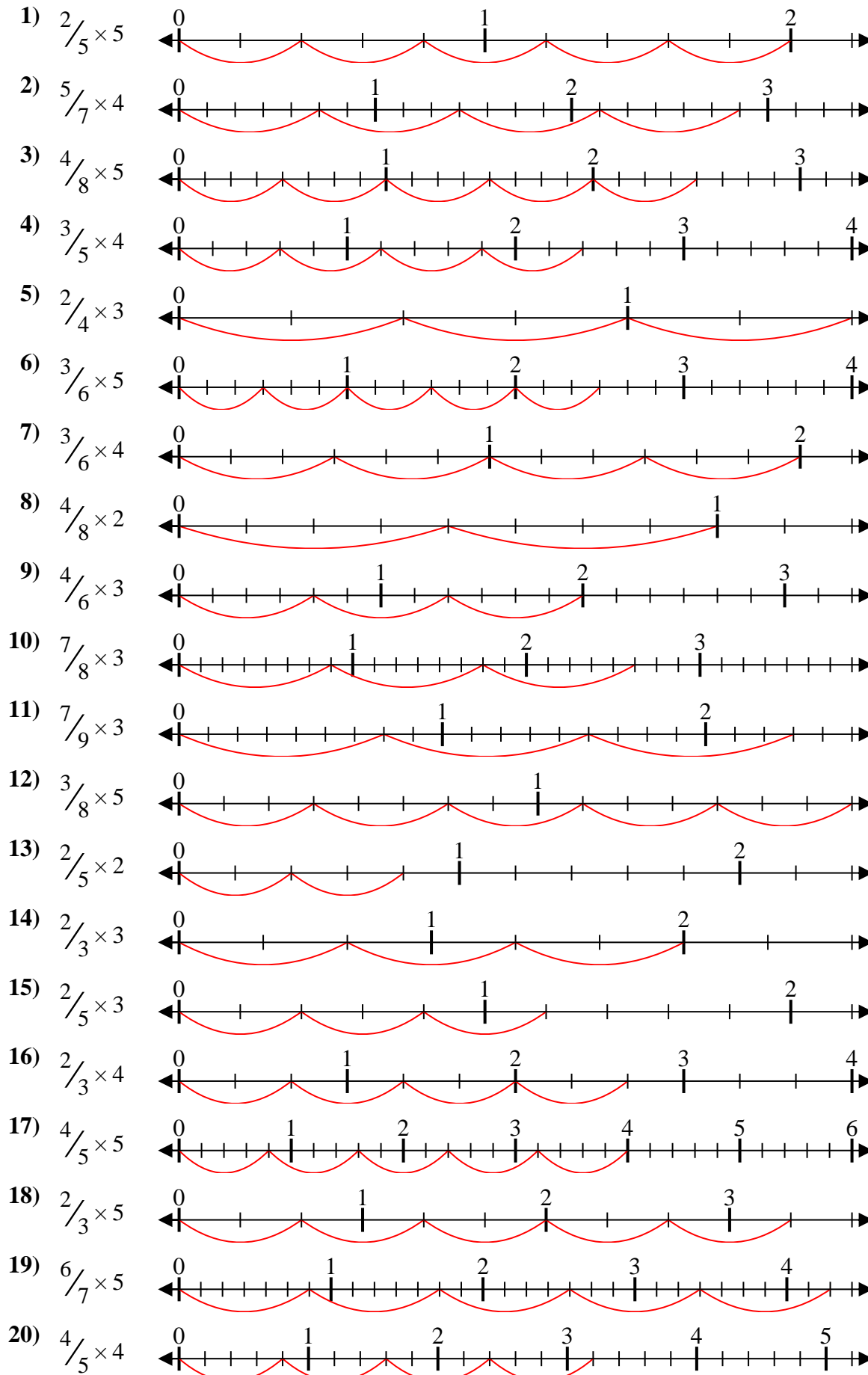
Answers



1. _____
2. _____
3. _____
4. _____
5. _____
6. _____
7. _____
8. _____
9. _____
10. _____
11. _____
12. _____
13. _____
14. _____
15. _____
16. _____
17. _____
18. _____
19. _____
20. _____



Solve each problem.



Answers

1. $\frac{10}{5} = 2$
2. $\frac{20}{7} = 2\frac{6}{7}$
3. $\frac{20}{8} = 2\frac{1}{2}$
4. $\frac{12}{5} = 2\frac{2}{5}$
5. $\frac{6}{4} = 1\frac{1}{2}$
6. $\frac{15}{6} = 2\frac{1}{2}$
7. $\frac{12}{6} = 2$
8. $\frac{8}{8} = 1$
9. $\frac{12}{6} = 2$
10. $\frac{21}{8} = 2\frac{5}{8}$
11. $\frac{21}{9} = 2\frac{1}{3}$
12. $\frac{15}{8} = 1\frac{7}{8}$
13. $\frac{4}{5} = \frac{4}{5}$
14. $\frac{6}{3} = 2$
15. $\frac{6}{5} = 1\frac{1}{5}$
16. $\frac{8}{3} = 2\frac{2}{3}$
17. $\frac{20}{5} = 4$
18. $\frac{10}{3} = 3\frac{1}{3}$
19. $\frac{30}{7} = 4\frac{2}{7}$
20. $\frac{16}{5} = 3\frac{1}{5}$