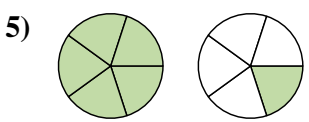
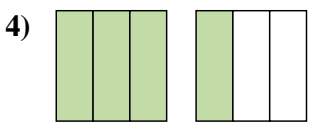
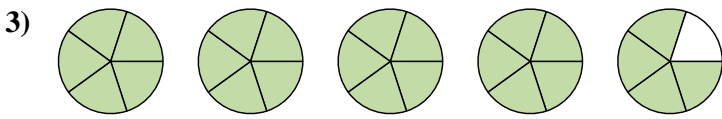
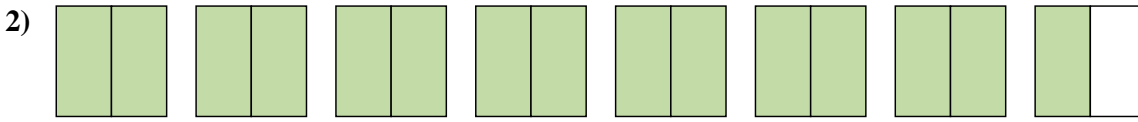
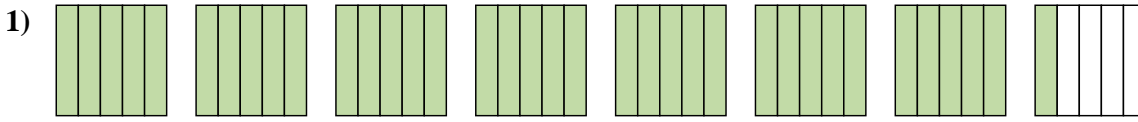


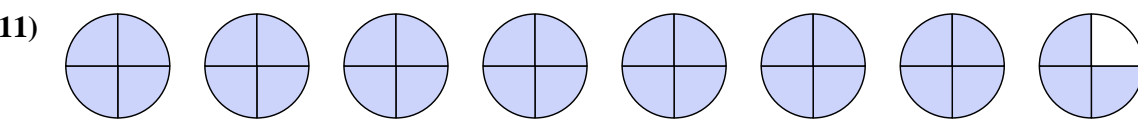
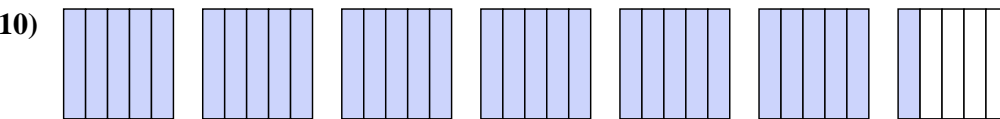
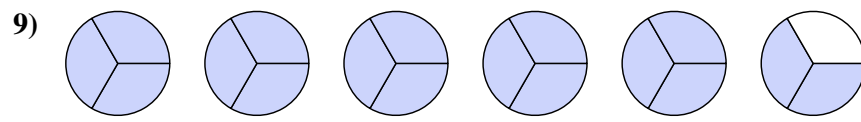
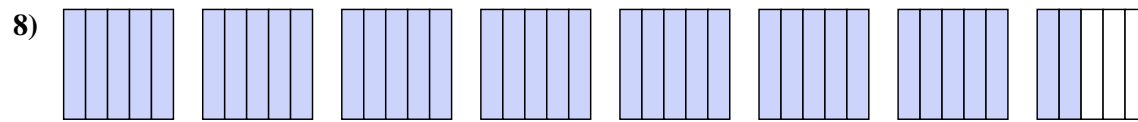
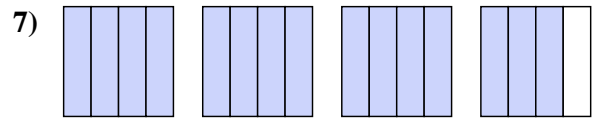
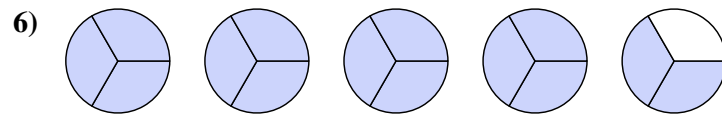




Write each amount as a mixed number.



Write each amount as an improper fraction.



Answers

1.  $7\frac{1}{5}$

2.  $7\frac{1}{2}$

3.  $4\frac{4}{5}$

4.  $1\frac{1}{3}$

5.  $1\frac{1}{5}$

6.  $\frac{14}{3}$

7.  $\frac{15}{4}$

8.  $\frac{37}{5}$

9.  $\frac{17}{3}$

10.  $\frac{31}{5}$

11.  $\frac{31}{4}$