





Write the shaded amount as a fraction.

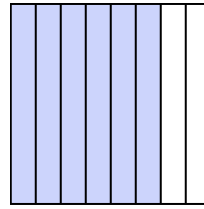
Ex)



1)



2)



**Answers**

Ex.  $\frac{2}{2}$

1. \_\_\_\_\_

2. \_\_\_\_\_

3. \_\_\_\_\_

4. \_\_\_\_\_

5. \_\_\_\_\_

6. \_\_\_\_\_

7. \_\_\_\_\_

8. \_\_\_\_\_

9. \_\_\_\_\_

10. \_\_\_\_\_


11. \_\_\_\_\_

12. \_\_\_\_\_


13. \_\_\_\_\_

14. \_\_\_\_\_


3)



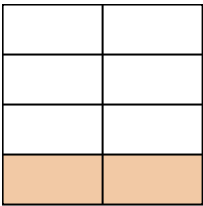
4)



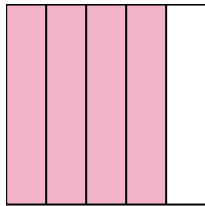
5)



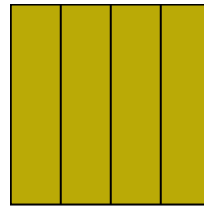
6)



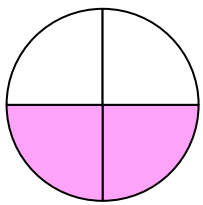
7)



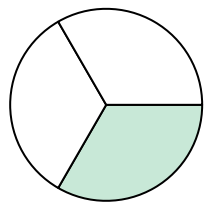
8)



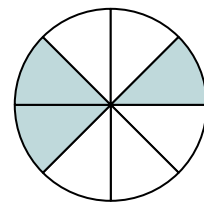
9)



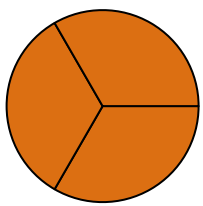
10)




11)



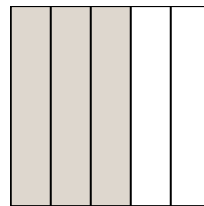
12)



13)

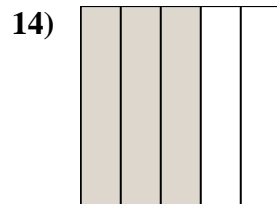
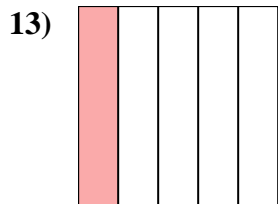
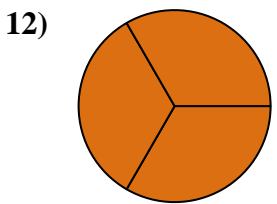
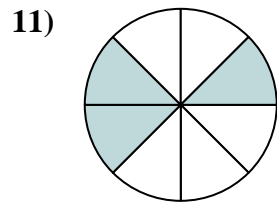
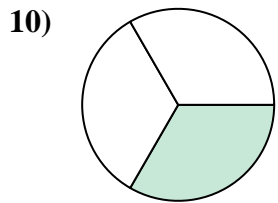
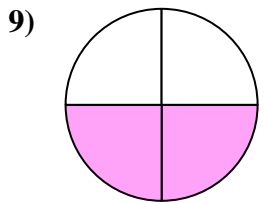
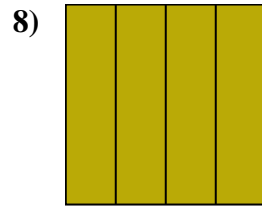
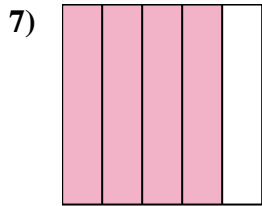
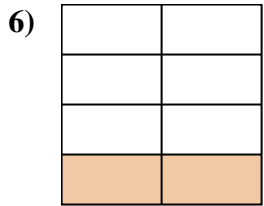
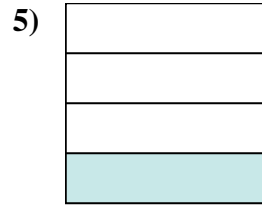
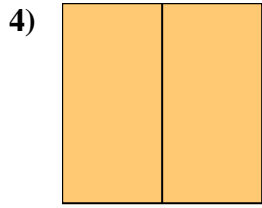
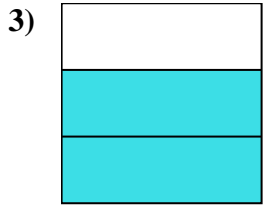
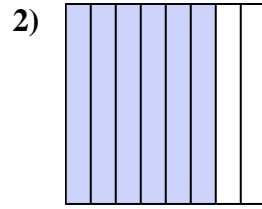
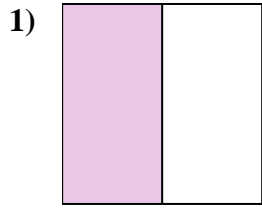
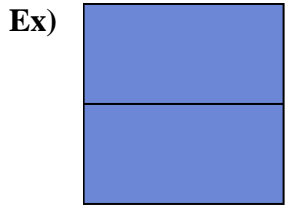


14)





Write the shaded amount as a fraction.



**Answers**

Ex. 2/2

1. 1/2

2. 6/8

3. 2/3

4. 2/2

5. 1/4

6. 2/8

7. 4/5

8. 4/4

9. 2/4

10. 1/3

11. 3/8

12. 3/3

13. 1/5

14. 3/5