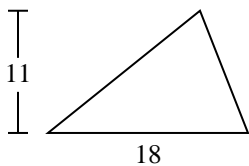




Find the area of the triangle. Round your answer to the nearest 10th.

Answers

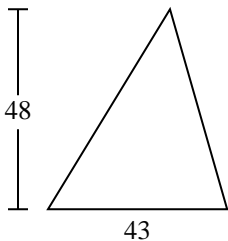
1)



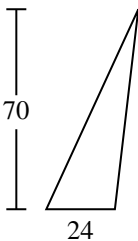
2)



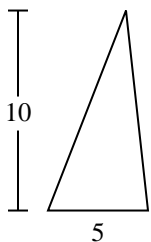
3)



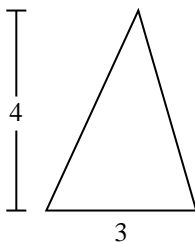
4)



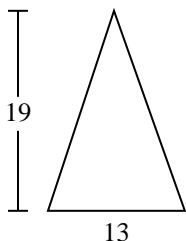
5)



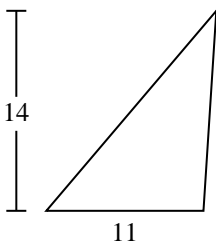
6)



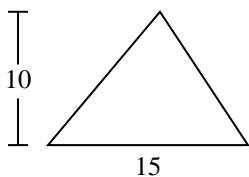
7)



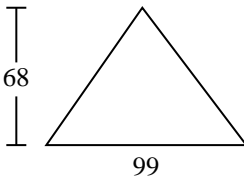
8)



9)



10)

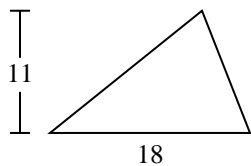


- 1. \_\_\_\_\_
- 2. \_\_\_\_\_
- 3. \_\_\_\_\_
- 4. \_\_\_\_\_
- 5. \_\_\_\_\_
- 6. \_\_\_\_\_
- 7. \_\_\_\_\_
- 8. \_\_\_\_\_
- 9. \_\_\_\_\_
- 10. \_\_\_\_\_



Find the area of the triangle. Round your answer to the nearest 10th.

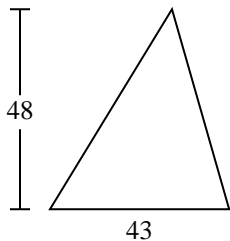
1)



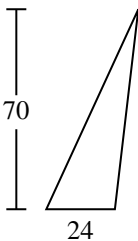
2)



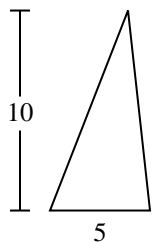
3)



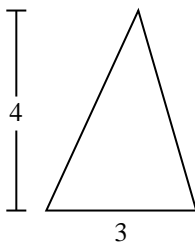
4)



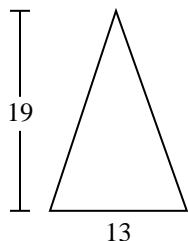
5)



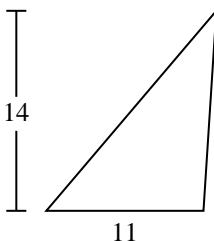
6)



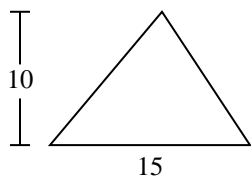
7)



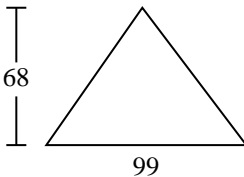
8)



9)



10)



Answers

1. 99

2. 7

3. 1,032

4. 840

5. 25

6. 6

7. 123.5

8. 77

9. 75

10. 3,366

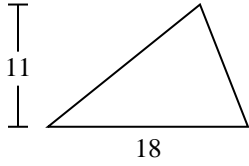


Find the area of the triangle. Round your answer to the nearest 10th.

|     |    |       |       |    |
|-----|----|-------|-------|----|
| 77  | 6  | 99    | 1,032 | 25 |
| 840 | 75 | 123.5 | 7     |    |

Answers

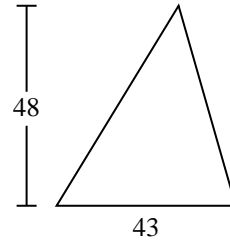
1)



2)



3)



1. \_\_\_\_\_

2. \_\_\_\_\_

3. \_\_\_\_\_

4. \_\_\_\_\_

5. \_\_\_\_\_

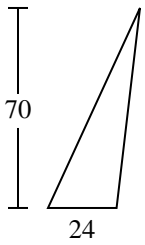
6. \_\_\_\_\_

7. \_\_\_\_\_

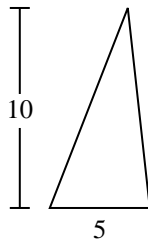
8. \_\_\_\_\_

9. \_\_\_\_\_

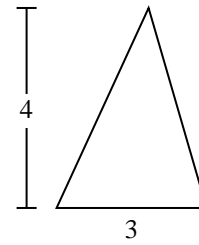
4)



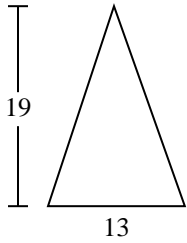
5)



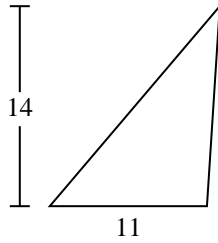
6)



7)



8)



9)

