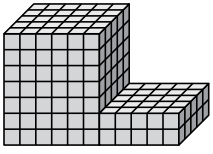




Find the total volume of each figure. Measurement is in cm (not to scale).

Answers

1)



1. _____

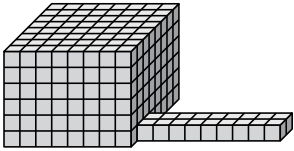
2. _____

3. _____

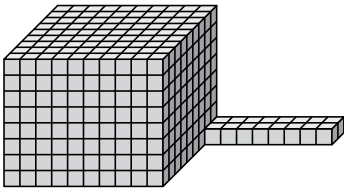
4. _____

5. _____

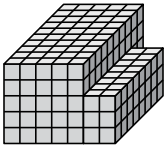
2)



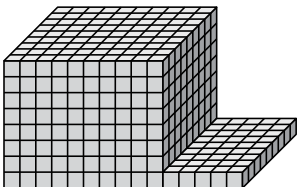
3)



4)

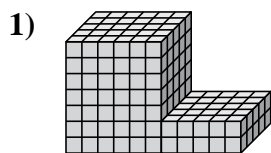


5)

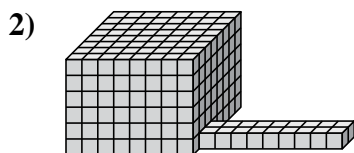




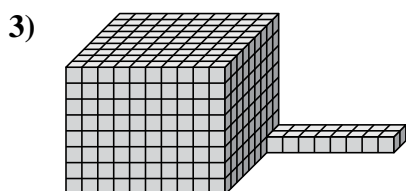
Find the total volume of each figure. Measurement is in cm (not to scale).



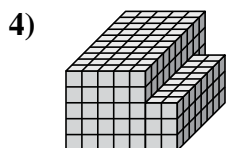
$$6 \times 5 \times 7 = 210$$
$$5 \times 5 \times 2 = 50$$



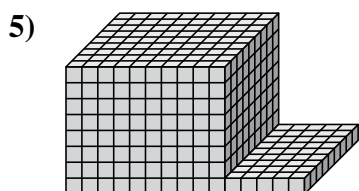
$$8 \times 8 \times 6 = 384$$
$$9 \times 2 \times 1 = 18$$



$$10 \times 9 \times 8 = 720$$
$$8 \times 2 \times 1 = 16$$



$$5 \times 10 \times 5 = 250$$
$$2 \times 8 \times 3 = 48$$



$$10 \times 9 \times 8 = 720$$
$$5 \times 9 \times 1 = 45$$

Answers

1. 260 cm³

2. 402 cm³

3. 736 cm³

4. 298 cm³

5. 765 cm³