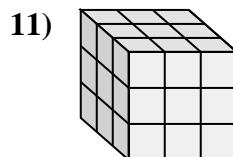
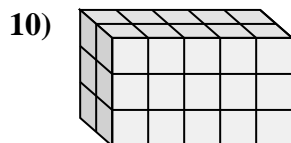
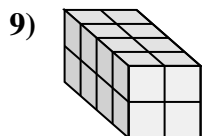
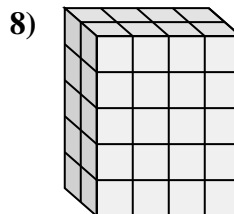
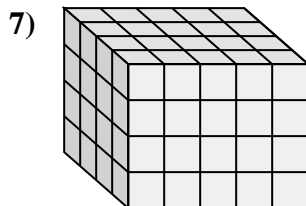
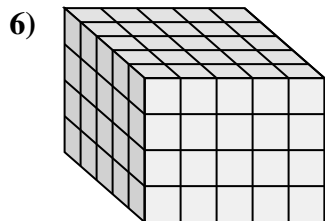
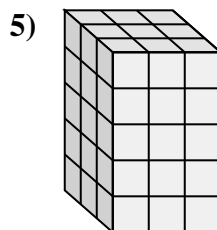
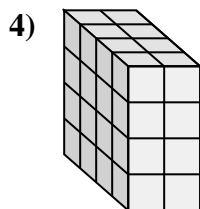
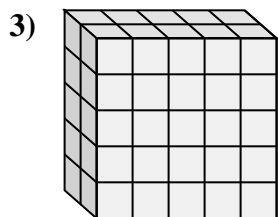
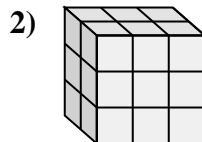
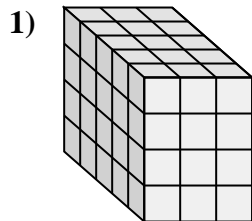
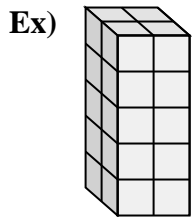




Match each problem with the equation that could represent it. Answer with the missing term and letter.



Answers

Ex. **H, 20**

1. _____

2. _____

3. _____

4. _____

5. _____

6. _____

7. _____

8. _____

9. _____

10. _____

11. _____

A. $2 \times 5 \times 3 = \underline{\quad}$

B. $4 \times 2 \times 4 = \underline{\quad}$

C. $2 \times 4 \times \underline{\quad} = 40$

D. $4 \times \underline{\quad} \times 2 = 16$

E. $\underline{\quad} \times 5 \times 5 = 50$

F. $5 \times 3 \times \underline{\quad} = 60$

G. $4 \times 5 \times \underline{\quad} = 80$

H. $2 \times 2 \times 5 = \underline{\quad}$

I. $\underline{\quad} \times 5 \times 4 = 100$

J. $2 \times \underline{\quad} \times 3 = 18$

K. $3 \times 3 \times 5 = \underline{\quad}$

L. $3 \times 3 \times \underline{\quad} = 27$

