



Determine which letter best represents the weight.

Gram (g)

A gram is about the weight of a paperclip.



Kilogram (kg)

A kilogram is about the weight of a thick book.



Remember:

Kilo means 1,000. So a kilogram is 1,000 grams.

1 Kilogram is also about the same weight as 2 pounds.

Answers

1. _____
2. _____
3. _____
4. _____
5. _____
6. _____
7. _____
8. _____
9. _____

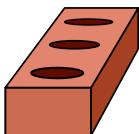
1)



Candle

- A. 10 kilograms
- B. 500 grams
- C. 4 grams
- D. 2 kilograms


2)



Brick

- A. 2 kilograms
- B. 500 kilograms
- C. 3 grams
- D. 500 grams

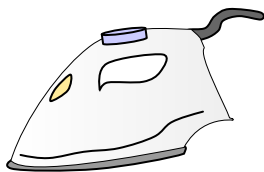
3)



Feather

- A. 200 grams
- B. 200 kilograms
- C. 1 kilogram
- D. 1 gram

4)



Clothes Iron

- A. 15 grams
- B. 100 grams
- C. 15 kilograms
- D. 2 kilograms

5)



Shovel

- A. 30 kilograms
- B. 5 kilograms
- C. 10 grams
- D. 1 gram

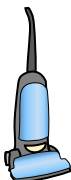
6)



File Cabinet

- A. 1 gram
- B. 1 kilogram
- C. 55 kilograms
- D. 300 grams

7)



Vacuum

- A. 20 kilograms
- B. 500 kilograms
- C. 90 grams
- D. 50 grams


8)



Flash Drive

- A. 10 grams
- B. 90 kilograms
- C. 10 kilograms
- D. 1 kilogram

9)



Adult Horse

- A. 30 kilograms
- B. 400 kilograms
- C. 400 grams
- D. 30 grams



Determine which letter best represents the weight.

Gram (g)

A gram is about the weight of a paperclip.



Kilogram (kg)

A kilogram is about the weight of a thick book.



Remember:

Kilo means 1,000. So a kilogram is 1,000 grams.

1 Kilogram is also about the same weight as 2 pounds.

Answers

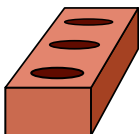
1)



Candle

- A. 10 kilograms
- B. 500 grams
- C. 4 grams
- D. 2 kilograms


2)



Brick

- A. 2 kilograms
- B. 500 kilograms
- C. 3 grams
- D. 500 grams

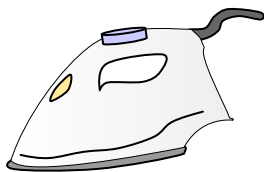
3)



Feather

- A. 200 grams
- B. 200 kilograms
- C. 1 kilogram
- D. 1 gram

4)



Clothes Iron

- A. 15 grams
- B. 100 grams
- C. 15 kilograms
- D. 2 kilograms

5)



Shovel

- A. 30 kilograms
- B. 5 kilograms
- C. 10 grams
- D. 1 gram

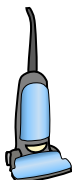
6)



File Cabinet

- A. 1 gram
- B. 1 kilogram
- C. 55 kilograms
- D. 300 grams

7)



Vacuum

- A. 20 kilograms
- B. 500 kilograms
- C. 90 grams
- D. 50 grams


8)



Flash Drive

- A. 10 grams
- B. 90 kilograms
- C. 10 kilograms
- D. 1 kilogram

9)



Adult Horse

- A. 30 kilograms
- B. 400 kilograms
- C. 400 grams
- D. 30 grams

- 1. **C**
- 2. **A**
- 3. **D**
- 4. **D**
- 5. **B**
- 6. **C**
- 7. **A**
- 8. **A**
- 9. **B**